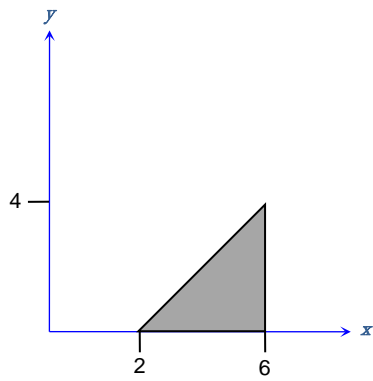
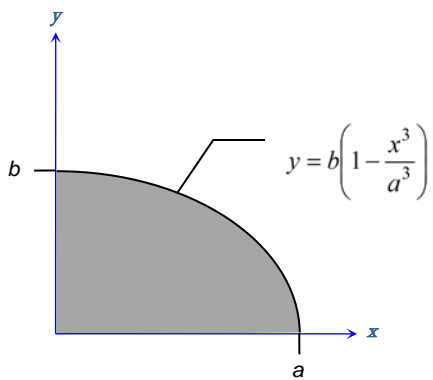

Example

Find the x -centroid for the shape below:



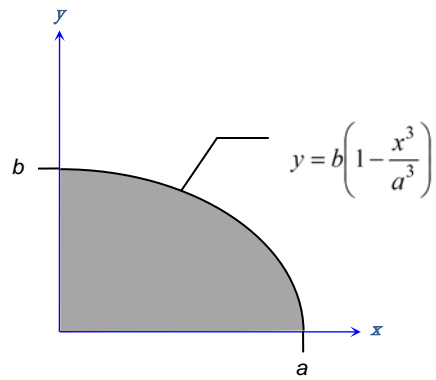
Example

Find the x -centroid for the shape below. Do you prefer a horizontal or vertical strip for your elemental area? Why?



Example

Find the y -centroid for the shape below. Use the same vertical strip you did for the last example.



Example

Find the y -centroid for the shape below. This time use a horizontal strip for the elemental area.

