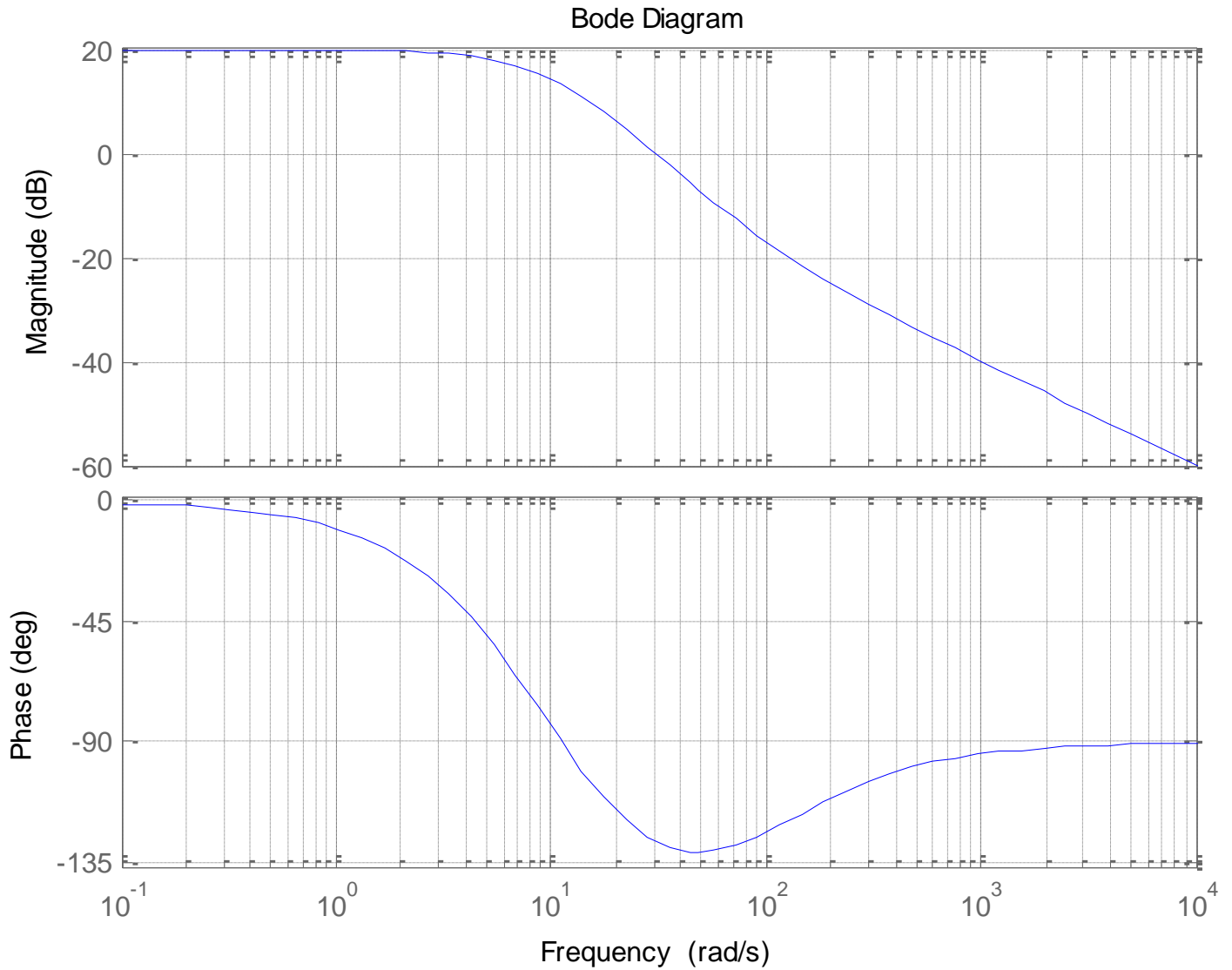


ECE-320 Quiz 8

Problems 1 and 2 refer to the following open loop Bode plot of $G(s)H(s)$

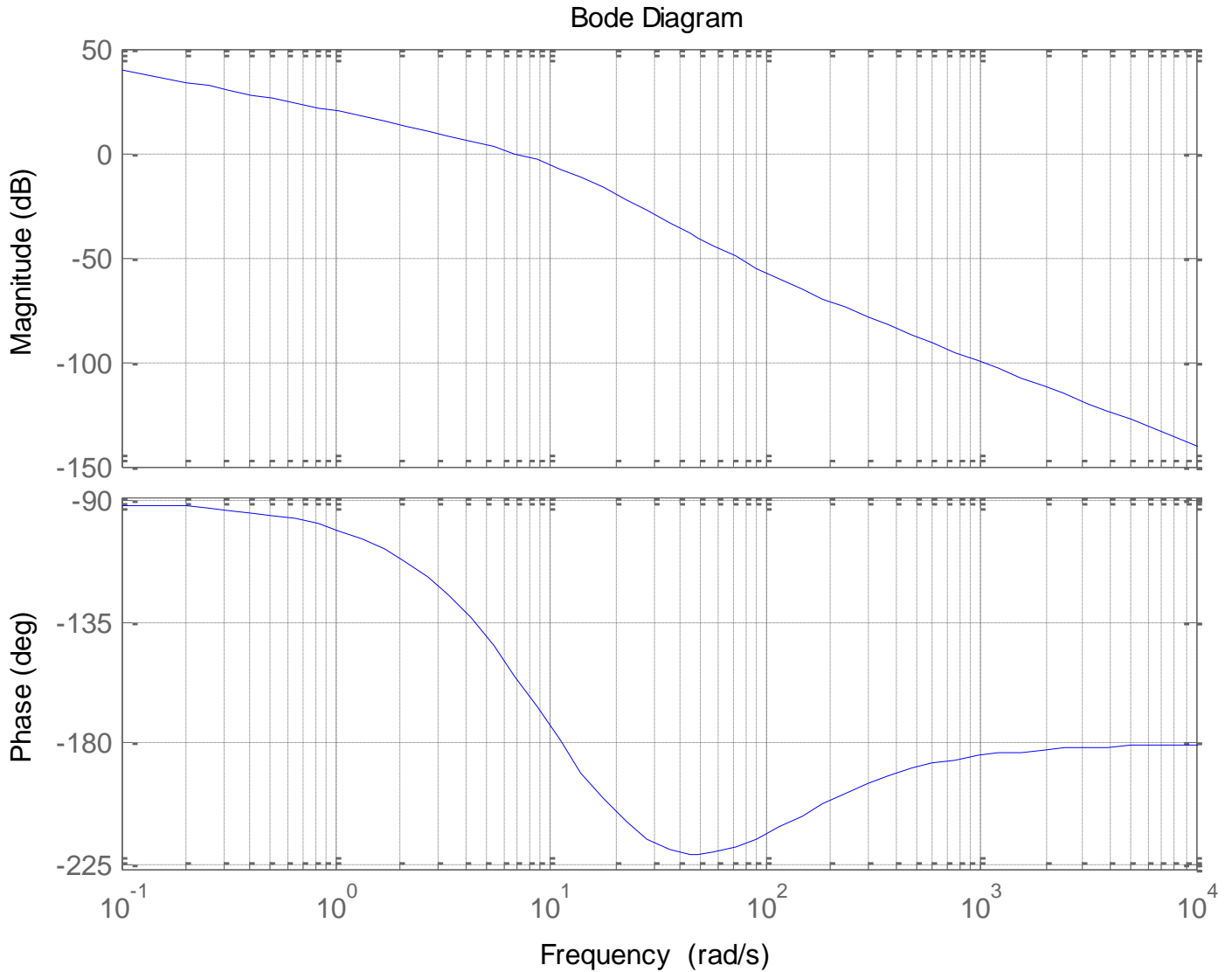


1) The *gain crossover frequency* used to determine the *phase margin* for this system is best estimated as

- a) 0.1 rad/sec b) 13 rad/sec c) 30 rad/sec d) 100 rad/sec e) 300 rad/sec

2) The *phase margin* for this system is best estimated as a) $+55^\circ$ b) -55° c) $+90^\circ$ d) -90°

Problems 3-6 refer to the following open loop Bode plot of $G(s)H(s)$



3) The gain crossover frequency used to determine the phase margin for this system is best estimated as

- a) 0 rad/sec b) 1 rad/sec c) 6 rad/sec d) 10 rad/sec e) 60 rad/sec

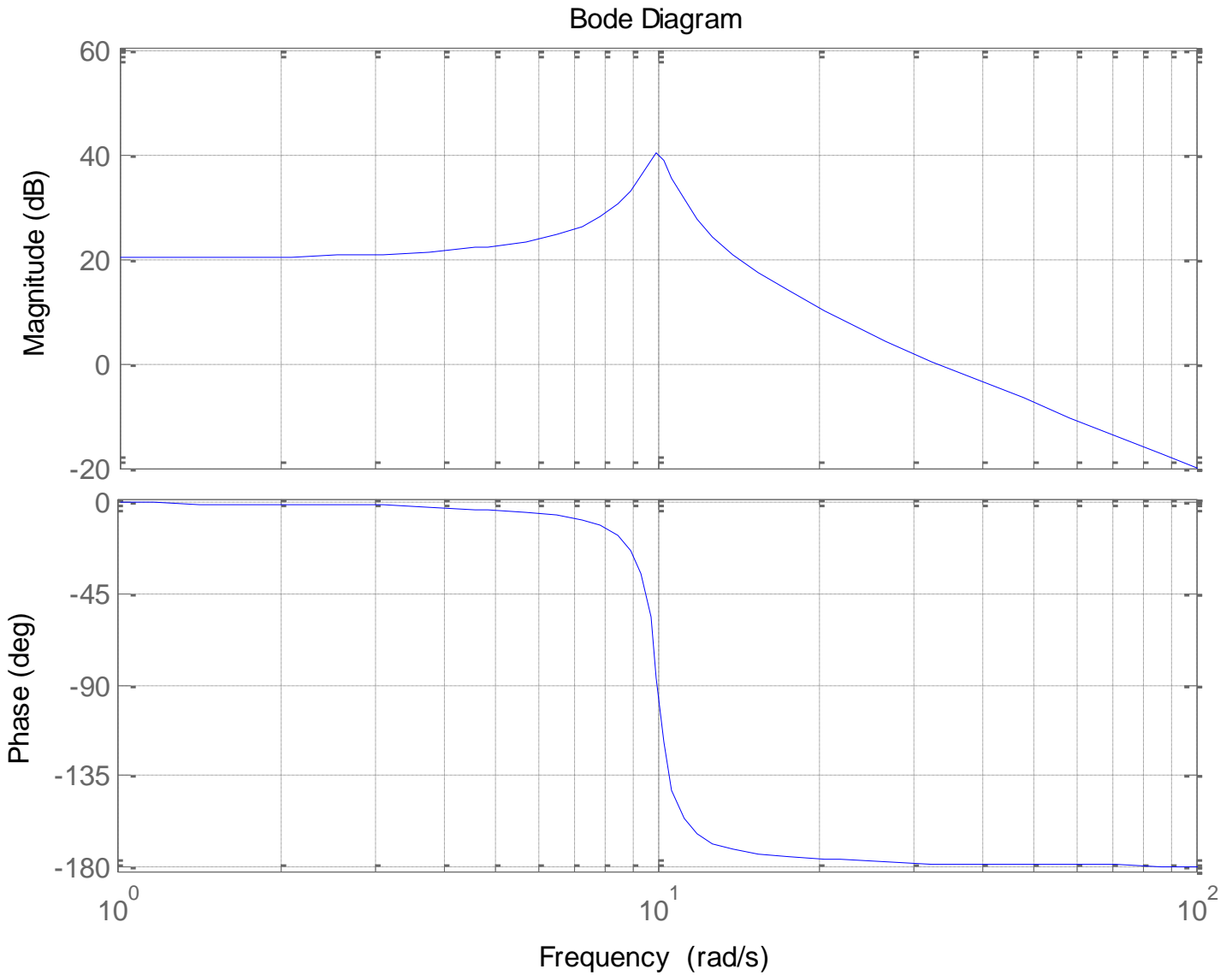
4) The phase crossover frequency for this system is best estimated as

- a) 0 rad/sec b) 1 rad/sec c) 6 rad/sec d) 10 rad/sec e) 60 rad/sec

5) The phase margin for this system is best estimated as a) $+25^\circ$ b) -25° c) $+45^\circ$ d) -45°

6) The gain margin for this system is best estimated as a) +8 dB b) - 8 dB c) ∞ dB d) 0 dB

Problems 7-10 refer to the following open loop Bode plot of $G(s)H(s)$



7) The *gain crossover frequency* used to determine the *phase margin* for this system is best estimated as

- a) 0 rad/sec b) 10 rad/sec c) 13 rad/sec d) 32 rad/sec

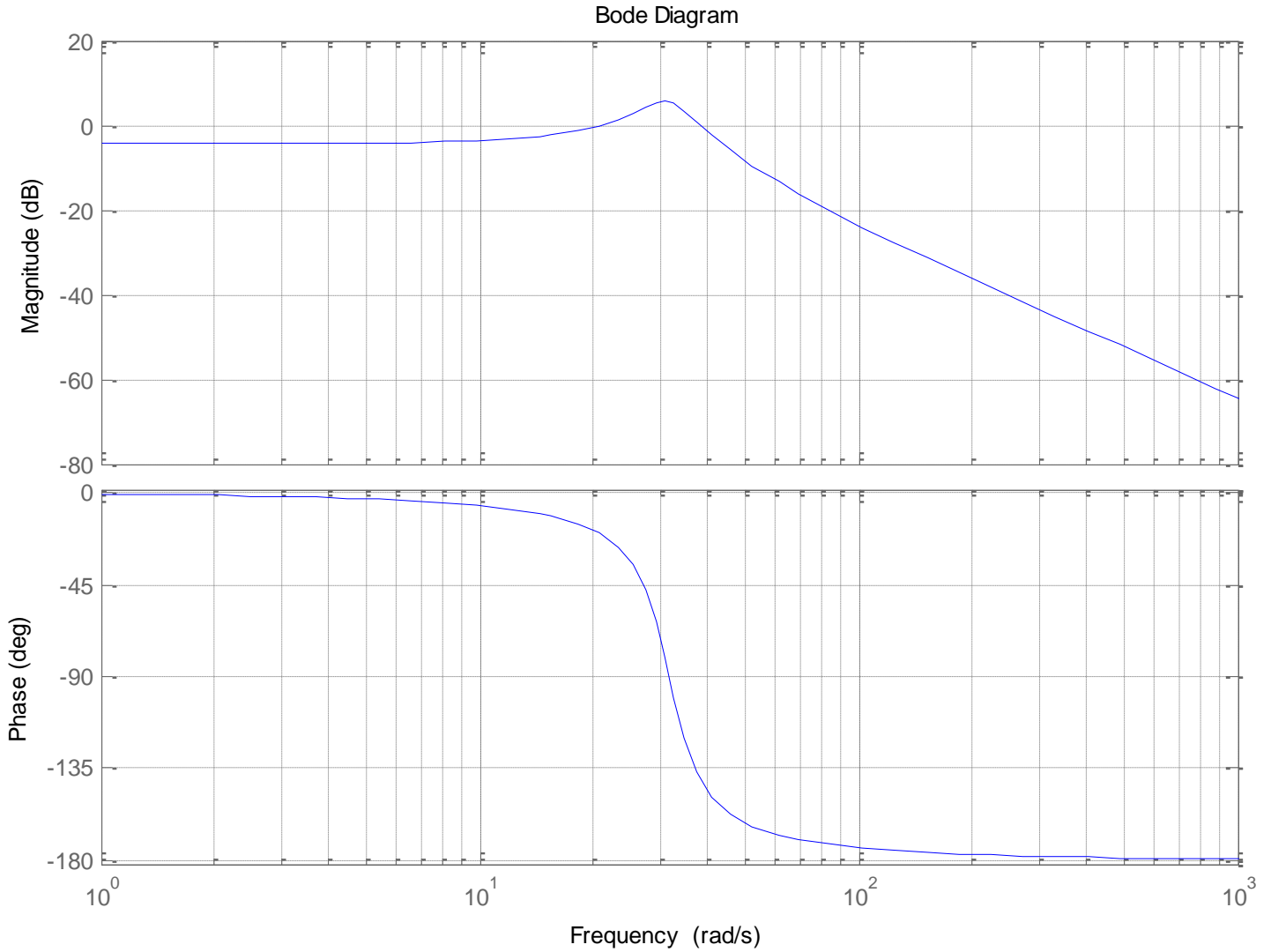
8) The *phase crossover frequency* for this system is best estimated as

- a) 0 rad/sec b) 1 rad/sec c) 10 rad/sec d) 20 rad/sec e) none of these

9) The *phase margin* for this system is best estimated as a) $+2^\circ$ b) -2° c) $+90^\circ$ d) -90°

10) The *gain margin* for this system is best estimated as a) +5 dB b) - 5 dB c) ∞ dB d) 0 dB

Problems 11 and 12 refer to the following open loop Bode plot of $G(s)H(s)$

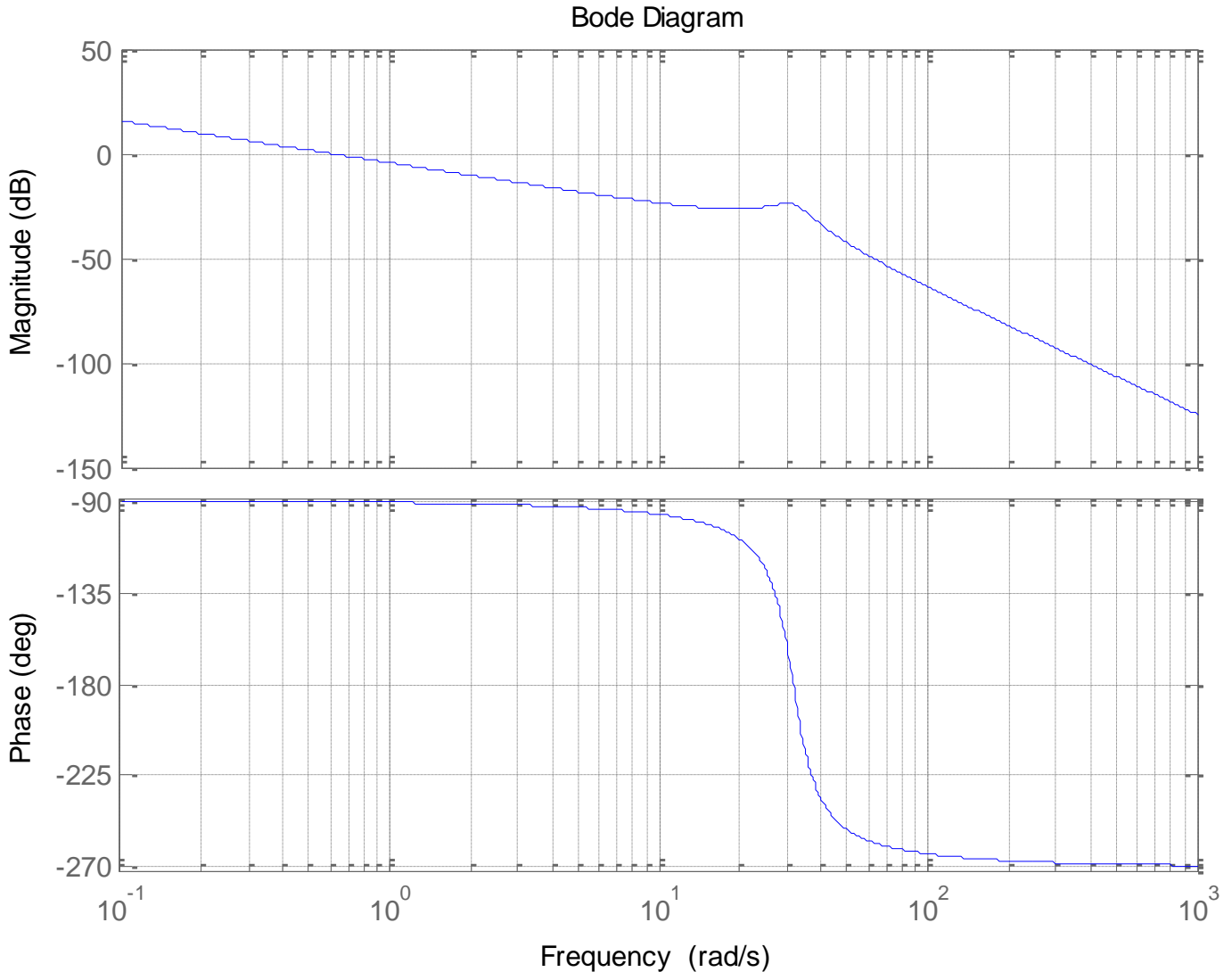


11) The *gain crossover frequency* used to determine the *phase margin* for this system is best estimated as

- a) 11 rad/sec b) 20 rad/sec c) 30 rad/sec d) 40 rad/sec

12) The *phase margin* for this system is best estimated as a) $+150^\circ$ b) $+120^\circ$ c) $+40^\circ$ d) -150°

Problems 13-16 refer to the following open loop Bode plot of $G(s)H(s)$



13) The *gain crossover frequency* used to determine the *phase margin* for this system is best estimated as

- a) 0.1 rad/sec b) 0.6 rad/sec c) 13 rad/sec d) 30 rad/sec

14) The *phase crossover frequency* for this system is best estimated as

- a) 0 rad/sec b) 10 rad/sec c) 13 rad/sec d) 30 rad/sec

15) The *phase margin* for this system is best estimated as a) $+90^\circ$ b) -90° c) $+20^\circ$ d) -20°

16) The *gain margin* for this system is best estimated as a) +25 dB b) -25 dB c) ∞ dB d) 0 dB

Name _____

CM _____