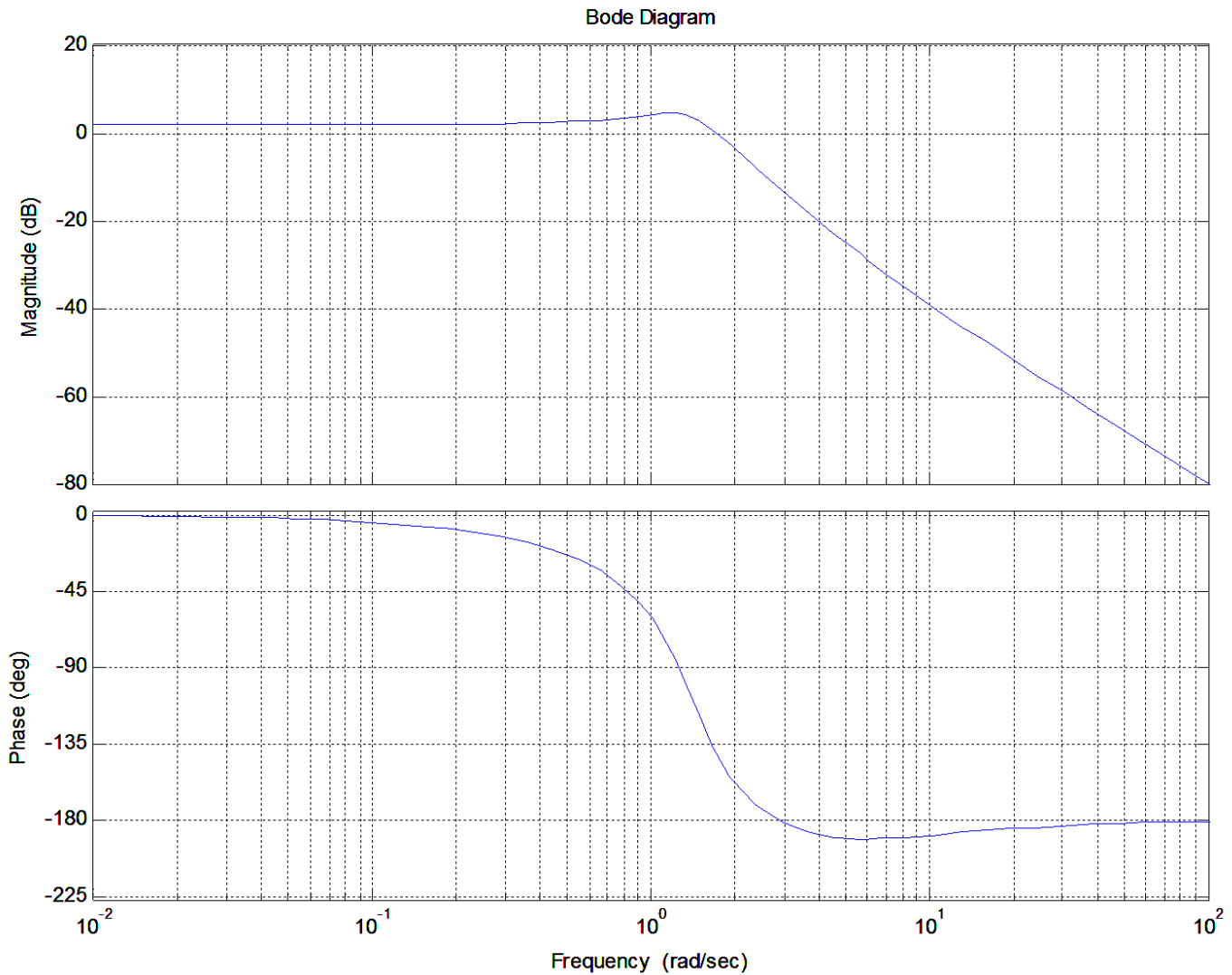


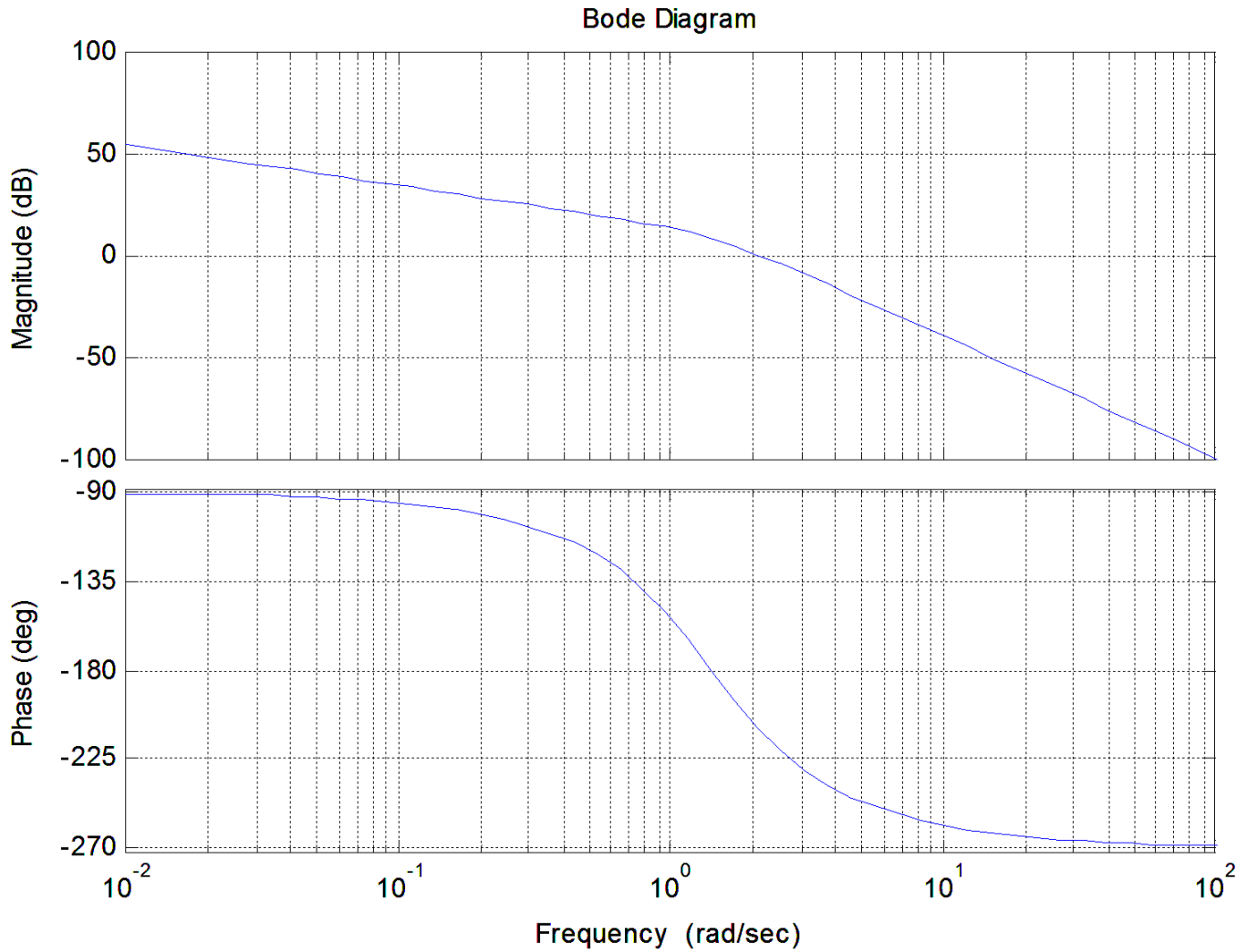
ECE-320 Practice Quiz 8

Problems 1-4 refer to the following open loop Bode plot of $G(s)H(s)$



- 1) The *gain crossover frequency* used to determine the *phase margin* for this system is best estimated as
a) 0 rad/sec b) 1 rad/sec c) 1.8 rad/sec d) 12 rad/sec e) 100 rad/sec
- 2) The *phase crossover frequency* for this system is best estimated as
a) 0 rad/sec b) 1.8 rad/sec c) 3 rad/sec d) 30 rad/sec e) 100 rad/sec
- 3) The *phase margin* for this system is best estimated as a) $+45^\circ$ b) -45° c) $+135^\circ$ d) -135°
- 4) The *gain margin* for this system is best estimated as a) +12 dB b) -12 dB c) ∞ dB d) -2 dB

Problems 5-8 refer to the following open loop Bode plot of $G(s)H(s)$



5) The *gain crossover frequency* used to determine the *phase margin* for this system is best estimated as

- a) 0 rad/sec b) 1 rad/sec c) 1.5 rad/sec d) 2 rad/sec e) 100 rad/sec

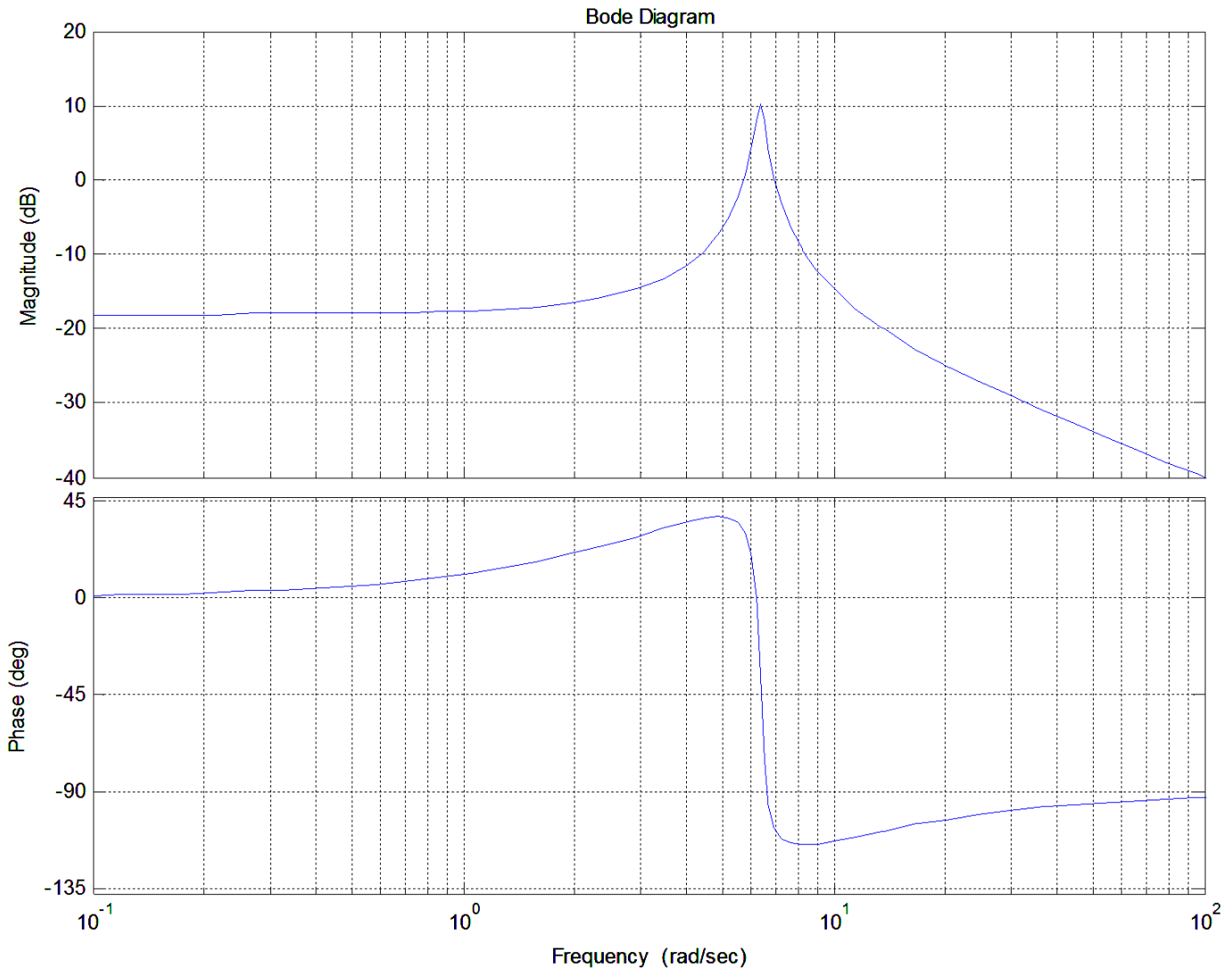
6) The *phase crossover frequency* for this system is best estimated as

- a) 0 rad/sec b) 1 rad/sec c) 1.5 rad/sec d) 2 rad/sec e) 100 rad/sec

7) The *phase margin* for this system is best estimated as a) $+30^\circ$ b) -30° c) $+60^\circ$ d) -60°

8) The *gain margin* for this system is best estimated as a) +5 dB b) -5 dB c) ∞ dB d) 0 dB

Problems 9-12 refer to the following open loop Bode plot of $G(s)H(s)$



9) The *gain crossover frequency* used to determine the *phase margin* for this system is best estimated as

- a) 0 rad/sec b) 5.5 rad/sec c) 7 rad/sec d) 15 rad/sec

10) The *phase crossover frequency* for this system is best estimated as

- a) 0 rad/sec b) 1 rad/sec c) 1.5 rad/sec d) 2 rad/sec e) none of these

11) The *phase margin* for this system is best estimated as a) $+70^\circ$ b) -70° c) $+135^\circ$ d) -135°

12) The *gain margin* for this system is best estimated as a) +5 dB b) -5 dB c) ∞ dB d) 0 dB

Answers: 1-c, 2-c, 3-a, 4-a, 5-d, 6-c, 7-b, 8-b, 9-c, 10-e, 11-a, 12-c