

Name Solutions Mailbox _____

ECE-320 Linear Control Systems

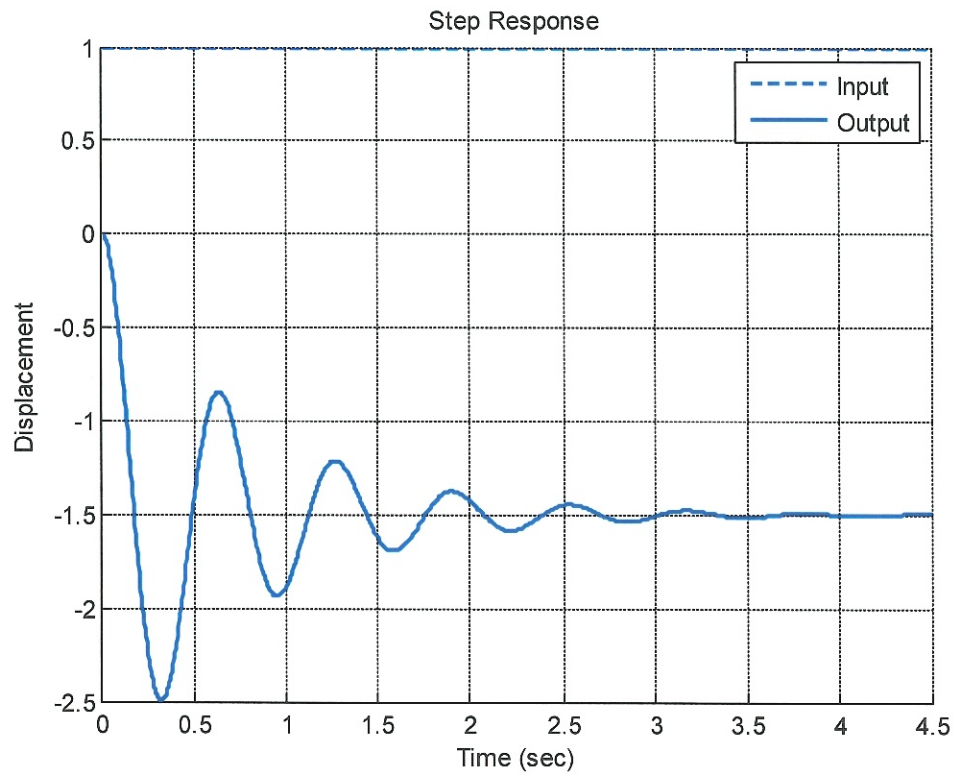
Spring 2012, Exam 1

No calculators or computers allowed, except for Problem 8 when you should use Matlab's sisotool.

You must simplify your answers as much as possible, or points will be deducted.

Problem 1	_____	/7
Problem 2	_____	/7
Problem 3	_____	/7
Problem 4	_____	/7
Problem 5	_____	/7
Problem 6	_____	/20
Problem 7	_____	/20
Problem 8	_____	/25
Total	_____	/100

1) (7 points) The following graph shows the **unit step response** for a system.



a) Estimate the **percent overshoot**

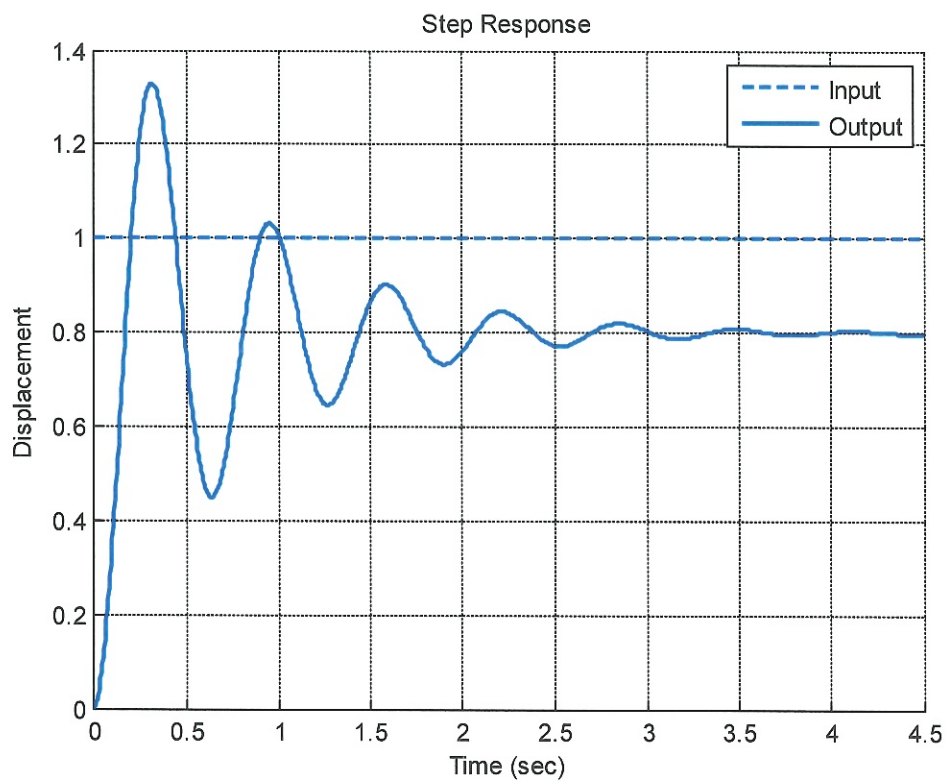
$$\frac{-2.5 - (-1.5)}{-1.5} = \frac{-1}{-1.5} = \frac{2}{3}$$

$$\text{P.O.} = 67\%$$

b) Estimate the **static gain**

$$K(\infty) = -1.5 \quad \boxed{K = -1.5}$$

2) (7 points) The following graph shows the unit step response of a system.



a) Estimate the steady state error.

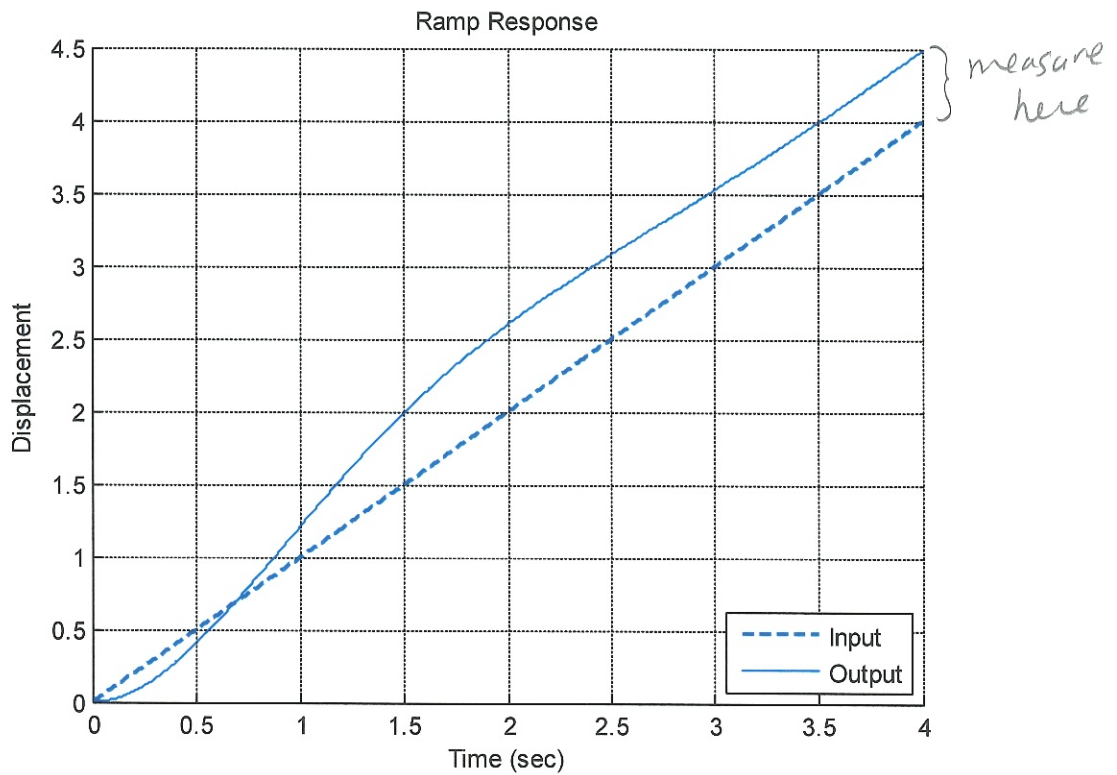
$$e_{ss} = 1 - 0.8 = 0.2 = e_{ss}$$

b) Estimate the steady state error for a unit ramp input.

type 0 system

$$e_{ss} = \infty \text{ for ramp}$$

3) (7 points) The following figure shows the unit ramp response of a system.



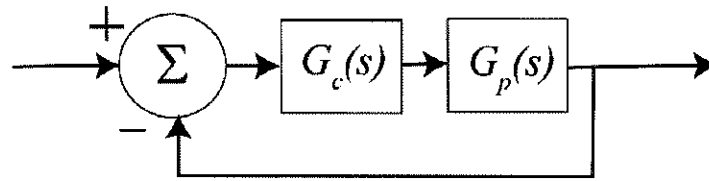
a) Estimate the **steady state error**.

$$e_{ss} = 4 - 4.5 = -0.5 = e_{ss}$$

b) Estimate the steady state error for a unit step input. *type 1 system*

$$e_{ss} = 0 \text{ for step}$$

4) (7 points) For the following systems, assume $G_c(s) = \frac{s+2}{s+3}$ and $G_p(s) = \frac{s+5}{s+4}$



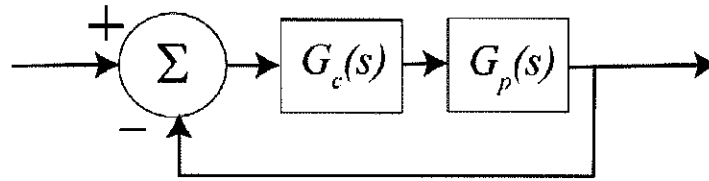
a) Determine the position error constant K_p

$$K_p = \lim_{s \rightarrow 0} G_c(s) G_p(s) = \boxed{\frac{5}{6} = K_p}$$

b) Determine the steady state error for a unit step input.

$$e_{ss} = \frac{1}{1+K_p} = \frac{1}{1+5/6} = \boxed{\frac{6}{11} = e_{ss}}$$

5) (7 points) For the following systems, assume $G_c(s) = \frac{2}{s}$ and $G_p(s) = \frac{s+5}{s+4}$



a) Determine the velocity error constant K_v .

$$K_v = \lim_{s \rightarrow 0} s G_c(s) G_p(s) = \frac{5}{2} = K_v$$

b) Determine the steady state error for a unit ramp input.

$$e_{ss} = \frac{1}{K_v} = \frac{2}{5} = e_{ss}$$

Name _____

Mailbox _____

6) (20 points) For a system with the transfer function $H(s) = \frac{1}{s(s+1)}$

a) Determine the **impulse response** $h(t)$

$$H(s) = \frac{1}{s(s+1)} = \frac{A}{s} + \frac{B}{s+1} \quad A = 1 \quad B = -1$$

$$h(t) = (1 - e^{-t})u(t)$$

b) Determine the **unit step response**.

$$Y(s) = H(s) \frac{1}{s} = \frac{1}{s^2(s+1)} = \frac{A}{s} + \frac{B}{s^2} + \frac{C}{s+1}$$

$$B = 1 \quad C = 1 \quad \times s, \text{ let } s \rightarrow \infty \quad 0 = A + C \quad A = -C = -1$$

$$y(t) = (-1 + t + e^{-t})u(t)$$

7) (20 points) For the system with closed loop transfer function $G_o(s) = \frac{k}{s^2 + 2s + k} = \frac{N}{D}$

a) Determine an expression for the sensitivity of G_o to k as a function of s , $S_k^{G_o}$

$$S_k^{G_o} = \frac{N}{D} \frac{\partial N}{\partial k} - \frac{N}{D} \frac{\partial D}{\partial k} = \frac{N}{D} (1) - \frac{N}{D} (1)$$

$$= 1 - \frac{k}{s^2 + 2s + k} = \frac{s^2 + 2s}{s^2 + 2s + k} = S_k^{G_o}$$

b) Determine an expression for the magnitude of the sensitivity function as a function of frequency, ω . Simplify your answers as much as possible.

$$\left| S_k^{G_o}(j\omega) \right| = \left| \frac{-\omega^2 + 2j\omega}{-\omega^2 + 2j\omega + k} \right| = \frac{\omega^2 + 4\omega^2}{\sqrt{(k - \omega^2)^2 + 4\omega^2}} = \left| S_k^{G_o}(j\omega) \right|$$

Name _____

Mailbox _____

8) (25 points) (*sisotool* problem)

Consider the plant

$$G_p(s) = \frac{30}{s^2 + 6s + 10}$$

Design a PID controller using *sisotool* with real zeros so that

$$T_s \leq 1.5 \text{ sec}$$

$$P.O. \leq 10\%$$

In addition, your controller must be designed so that

$$k_p \leq 0.5$$

$$k_i \leq 2$$

$$k_d \leq 0.05$$

Write your final values for k_p , k_i , k_d , and the transfer function of the controller in the space below.