

Name _____ CM _____

Quiz 4

1) The **impulse response** for the LTI system $y(t) = \int_{-\infty}^{t+1} e^{-(t-\lambda)} x(\lambda - 3) d\lambda$ is

- a) $h(t) = e^{-(t-3)} u(t)$ b) $h(t) = e^{-(t-3)} u(t+1)$ c) $h(t) = e^{-(t-3)} u(t-3)$
d) $h(t) = e^{-(t-3)} u(t-2)$ e) $h(t) = e^{-(t-3)} u(t-1)$ f) none of these

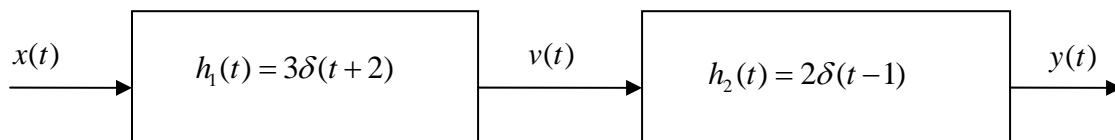
2) The **impulse response** for the LTI system $y(t) = x(t-1) + \int_{-\infty}^{t-2} e^{-(t-\lambda)} x(\lambda - 3) d\lambda$ is

- a) $h(t) = \delta(t-1) + e^{-(t-3)} u(t)$ b) $h(t) = u(t-1) + e^{-(t-3)} u(t)$
c) $h(t) = \delta(t-1) + e^{-(t-3)} u(t-1)$ d) $h(t) = u(t-1) + e^{-(t-3)} u(t+1)$
e) $h(t) = \delta(t-1) + e^{-(t-3)} u(t-3)$ f) none of these

3) The **impulse response** for the LTI system $\dot{y}(t) - y(t) = x(t-1)$ is

- a) $h(t) = e^{(t-1)} u(t-1)$ b) $h(t) = e^{-(t-1)} u(t-1)$ c) $h(t) = e^{-(t-1)} u(t)$
d) $h(t) = e^{(t-1)} u(t)$ e) none of these

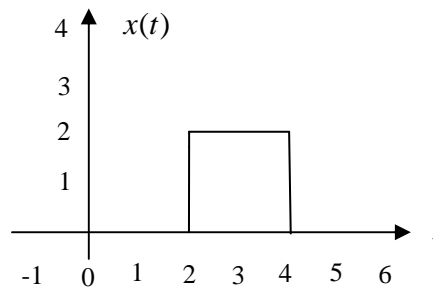
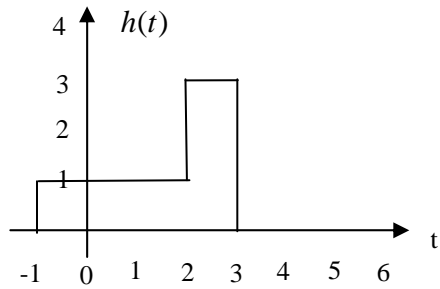
4) The **impulse response** of the system



is

- a) $h(t) = 6u(t)$ b) $h(t) = 6u(t-1)$ c) $h(t) = 6u(t+1)$
d) $h(t) = 6\delta(t)$ e) none of these

Problems 5 - 8 refer to the following linear time invariant (LTI) system, with impulse response $h(t)$ shown below on the left, and input $x(t)$ shown below on the right. The output of the system, $y(t)$, is the convolution of the impulse response with the input, $y(t) = h(t) * x(t)$.



- 5) Is this LTI system causal? a) Yes b) No
- 6) The maximum value of $y(t)$ is a) 4 b) 5 c) 6 d) 7 e) 8
- 7) $y(t)$ is zero until what time? a) 0 b) 1 c) 2 d) 3 e) 4
- 8) $y(t)$ will return to zero at what time? a) 6 b) 7 c) 8 d) 9 e) 10