

ECE300 Hw4 Sol W0809

Tuesday, January 06, 2009

10:12 PM

Problem 1: Determine if the following systems are BIBO Stable.

$$(a) y(t) = \int_{-\infty}^t (x(\lambda) - 5) d\lambda$$

$$h(t) = \int_{-\infty}^t \delta(\lambda) - 5 d\lambda = u(t) - 5[t + \infty]$$

The system is obviously not stable because even an impulse produces an unbounded output

NOT BIBO stable

$$(b) y(t) = \cos\left(\frac{1}{x(t)}\right)$$

yes it is BIBO stable. The cosine function is bounded between ± 1 for all values of $x(t)$

$$(c) y(t) = e^{-|x(t)|}$$

$e^{-|x|}$ is bounded to be less than 1 for all values of x . yes it is BIBO stable

$$(d) y(t) = x(t) + y(t)x(t)$$

$$y(t) = \frac{x(t)}{1-x(t)} \quad \text{if } x(t) = 1 \quad y(t) = \infty$$

NOT BIBO stable

Problem 2

Tuesday, January 06, 2009

10:42 PM

For systems w/ following impulse response, determine if the system is stable

(a) $h(t) = e^{-t} u(t)$

$$\int_{-\infty}^{\infty} |h(t)| dt = \int_0^{\infty} e^{-t} dt = 1 \quad \underline{\text{so BIBO stable}}$$

(b) $h(t) = u(t)$

$$\int_{-\infty}^{\infty} u(t) dt = \int_0^{\infty} dt = \infty \quad \underline{\text{Not BIBO stable}}$$

(c) $h(t) = u(t) - u(t-10)$

$$\int_{-\infty}^{\infty} |h(t)| dt = \int_0^{10} dt = 10 \quad \underline{\text{BIBO stable}}$$

(d) $h(t) = \delta(t-1)$

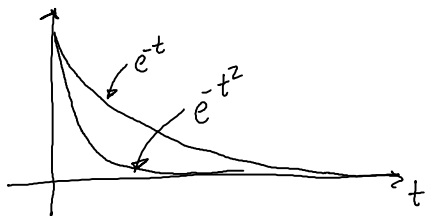
$$\int_{-\infty}^{\infty} |h(t)| dt = \int_{-\infty}^{\infty} \delta(t-1) dt = 1 \quad \underline{\text{BIBO stable}}$$

(e) $h(t) = \sin(t) u(t)$

$$\int_{-\infty}^{\infty} |h(t)| dt = \int_0^{\infty} |\sin(t)| dt = \infty \quad \underline{\text{Not BIBO stable}}$$

(f) $h(t) = e^{-t^2} u(t)$

$$\int_{-\infty}^{\infty} |h(t)| dt = \int_0^{\infty} e^{-t^2} dt \leq \int_0^{\infty} e^{-t} dt \quad \text{because } e^{-t^2} \text{ decays to } 0 \text{ faster than } e^{-t} \text{ which is part (a)}$$



So BIBO stable

Problem 3

Wednesday, January 07, 2009

1:37 PM

(a) Use Euler's Identity to show that

$$\sin(\alpha) \cos(\beta) = \frac{1}{2} [\sin(\alpha+\beta) - \sin(\beta-\alpha)]$$

$$\begin{aligned} \sin(\alpha) \cos(\beta) &= \frac{1}{2j} [e^{j\alpha} - e^{-j\alpha}] \frac{1}{2} [e^{j\beta} + e^{-j\beta}] \\ &= \frac{1}{4j} [e^{j(\alpha+\beta)} + e^{j(\alpha-\beta)} - e^{j(\beta-\alpha)} - e^{-j(\alpha+\beta)}] \\ &= \frac{1}{2} \left[\frac{e^{j(\alpha+\beta)} - e^{-j(\alpha+\beta)}}{2j} - \frac{e^{j(\beta-\alpha)} - e^{-j(\beta-\alpha)}}{2j} \right] \\ &= \frac{1}{2} [\sin(\alpha+\beta) - \sin(\beta-\alpha)] \end{aligned}$$

$$\sin(\alpha) \sin(\beta) = \frac{1}{2} [\cos(\alpha-\beta) - \cos(\alpha+\beta)]$$

$$\begin{aligned} \sin(\alpha) \sin(\beta) &= \frac{-1}{4} [e^{j\alpha} - e^{-j\alpha}] [e^{j\beta} - e^{-j\beta}] \\ &= \frac{-1}{4} [e^{j(\alpha+\beta)} - e^{j(\alpha-\beta)} - e^{j(\beta-\alpha)} + e^{-j(\alpha+\beta)}] \\ &= \frac{-1}{2} \left[\frac{e^{j(\alpha+\beta)} + e^{-j(\alpha+\beta)}}{2} - \frac{e^{j(\alpha-\beta)} + e^{-j(\alpha-\beta)}}{2} \right] \\ &= \frac{1}{2} [\cos(\alpha-\beta) - \cos(\alpha+\beta)] \end{aligned}$$

(b) show that for $x(t) = V_m \sin\left(\frac{\omega_0 t}{2}\right)$ $0 < t < T_0$ the trig

Fourier Series are given by

$$a_0 = \frac{2V_m}{\pi}$$

$$a_k = \frac{V_m}{\pi} \frac{1}{0.25 - k^2}$$

$$b_k = 0$$

$$a_k = \frac{2}{T_0} \int_0^{T_0} V_m \sin\left(\frac{\omega_0 t}{2}\right) \cos(k\omega_0 t) dt$$

$$= \frac{V_m}{T_0} \int_0^{T_0} \left[\sin\left(\frac{\omega_0 t}{2} + k\omega_0 t\right) - \sin\left(k\omega_0 t - \frac{\omega_0 t}{2}\right) \right] dt$$

$$= \frac{V_m}{T_0} \left[\frac{-1}{\omega_0(k+\frac{1}{2})} \cos(\omega_0 t(k+\frac{1}{2})) + \frac{1}{\omega_0(k-\frac{1}{2})} \cos(\omega_0 t(k-\frac{1}{2})) \right] \Big|_0^{T_0}$$

$$= \frac{V_m}{T_0} \left[\frac{-1}{\omega_0(k+\frac{1}{2})} \cos(2\pi(k+\frac{1}{2})) + \frac{1}{\omega_0(k-\frac{1}{2})} \cos(2\pi(k-\frac{1}{2})) + \frac{1}{\omega_0(k+\frac{1}{2})} - \frac{1}{\omega_0(k-\frac{1}{2})} \right]$$

$$\cos(2\pi(k+\frac{1}{2})) = \cos(2\pi(k-\frac{1}{2})) = -1 \quad \forall k = 1, 2, 3, \dots$$

$$a_k = \frac{V_m}{T_0} \left[\frac{2}{\omega_0(k+\frac{1}{2})} - \frac{2}{\omega_0(k-\frac{1}{2})} \right] = \frac{2V_m}{T_0} \left[\frac{k-\frac{1}{2} - k - \frac{1}{2}}{\omega_0(k^2 - \frac{1}{4})} \right]$$

$$= \frac{2V_m}{T_0} \frac{1}{\omega_0(\frac{1}{4} - k^2)} = \boxed{\frac{V_m}{\pi(\frac{1}{4} - k^2)}}$$

$$a_0 = \frac{1}{T_0} \int_0^{T_0} V_m \sin\left(\frac{\omega_0 t}{2}\right) dt = -\frac{2V_m}{\omega_0 T_0} \cos\left(\frac{\omega_0 t}{2}\right) \Big|_0^{T_0} = -\frac{V_m}{\pi} [\cos(\pi) - \cos(0)]$$

$$= \frac{2V_m}{\pi}$$

(b) cont'd.

$$b_k = \frac{2}{T_0} \int_0^{T_0} \sin\left(\frac{\omega_0 t}{2}\right) \sin(k\omega_0 t) dt$$

$$= \frac{1}{T_0} \int_0^{T_0} \left[\cos\left(\frac{\omega_0 t}{2} - k\omega_0 t\right) - \cos\left(\frac{\omega_0 t}{2} + k\omega_0 t\right) \right] dt$$

$$= \frac{1}{T_0} \left[\frac{1}{\omega_0\left(\frac{1}{2}-k\right)} \sin\left(\frac{\omega_0 t}{2} - k\omega_0 t\right) - \frac{1}{\omega_0\left(\frac{1}{2}+k\right)} \sin\left(\frac{\omega_0 t}{2} + k\omega_0 t\right) \right] \Bigg|_0^{T_0}$$

$$= \frac{1}{T_0} \left[\frac{1}{\omega_0\left(\frac{1}{2}-k\right)} \sin\left(2\pi\left(\frac{1}{2}-k\right)\right) - \frac{1}{\omega_0\left(\frac{1}{2}+k\right)} \sin\left(2\pi\left(\frac{1}{2}+k\right)\right) - 0 + 0 \right]$$

$$\sin\left(2\pi\left(\frac{1}{2}-k\right)\right) = \sin\left(2\pi\left(\frac{1}{2}+k\right)\right) = 0 \quad \forall k=1,2,3,\dots$$

$$b_k = 0$$

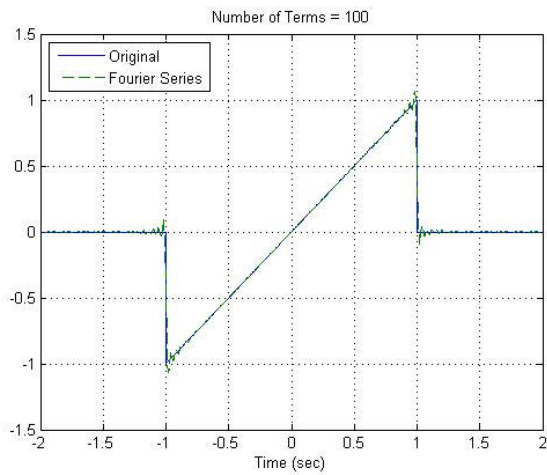
Problem 4

Wednesday, January 07, 2009

2:42 PM

Matlab

(a) The result of a $N=100$ sine series is:

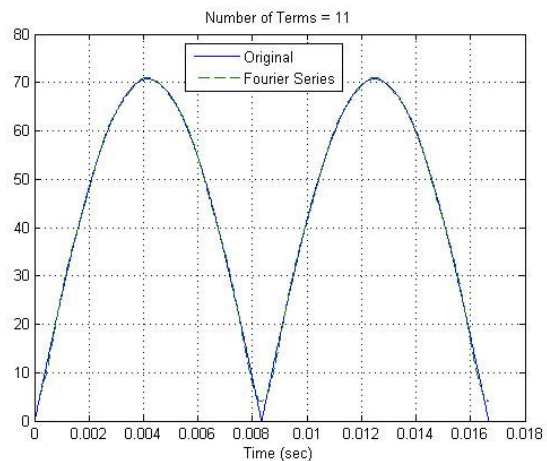
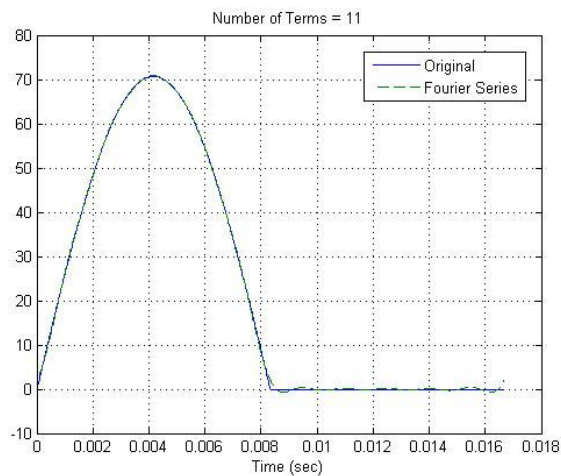


(b) • What variable in the code represents the Fourier Series Approx?
est

• Why does a_0 not need to be in "for loop"?

Because it is the DC offset of the estimate it can be used as the initial condition before the for loop.

d)



```

%
% This routine implements a trigonometric Fourier Series
%
% Inputs: N is the number of terms to be used in the series
%
function Trig_Fourier_series(N)
%
% one period of the function goes from low to high
%
    low = 0;
    high = 1/60;
%
% the difference between low and high is one period
%
    T = high-low;
    w0 = 2*pi/T;
%
% the periodic function
%
    x = @(t) 100/sqrt(2)*abs(sin(2*pi*60*t)).*(t<=T);
%
% find b(1) to b(N)
%
    for k = 1:N
        barg = @(t) x(t). *sin(k*w0*t);
        aarg = @(t) x(t). *cos(k*w0*t);
        a(k) = (2/T)*quadl(aarg,low,high);
        b(k) = (2/T)*quadl(barg,low,high);
    end;
%
% determine a time vector over one period
%
    t = linspace(low,high,1000);
%
% Find the Fourier series representation
%
    a0arg = @(t) x(t);
    a0 = (1/T)*quadl(a0arg,low,high);
    est = a0;
    for k = 1:N
        est = est + b(k)*sin(k*w0*t) + a(k)*cos(k*w0*t);
    end;
%
% plot the results
%
    plot(t,x(t),'- ',t,est,'--'); grid; xlabel('Time (sec)');
    legend('Original','Fourier Series','Location','NorthWest');
    title(['Number of Terms = ', num2str(N)]);
%

```