

ECE 300
Signals and Systems
Homework 3

Due Date: Tuesday December 18, 2007 at the beginning of class

EXAM #1, Thursday December 20

Problems

1. ZTF Problem 2-19 (use the method from class, solve the DE).
2. ZTF Problem 2-24.
3. The continuous-time I - interval moving average (MA) filter is given by the input/output relationship

$$y(t) = \frac{1}{I} \int_{t-I}^t x(\lambda) d\lambda$$

- a. Determine the impulse response of the system. Write your answers in terms of unit step functions.
- b. Determine the step response of the system, that is, determine the output when the input is a unit step. (Answer: $y(t) = \frac{1}{I} [tu(t) - (t-I)u(t-I)]$)
- c. Determine the ramp response of the system, that is, determine the output when the input is a unit ramp.
- d. Show that in steady state ($t > I$) the delay between the input and output is $\frac{I}{2}$
Hint: Draw pictures of the integrand and look at what happens as the interval $[t, t-I]$ varies.

$$y(t) = \begin{cases} e^{-(t-1)}[e^1 - 1] & 2 \leq t \leq 4 \\ e^{-(t-1)}[e^1 - 1] + e^{-(t-1)}[e^{t-1} - e^3] & 4 \leq t \leq 5 \end{cases}$$

6. Consider a linear time invariant system with impulse response given by

$$h(t) = e^{-(t+1)}u(t+1)$$

The input to the system is given by

$$x(t) = 2[u(t) - u(t-1)] + 3[u(t-3) - u(t-4)]$$

Using **graphical convolution**, determine the output $y(t)$. Specifically, you must

- Flip and slide $h(t)$
- Show graphs displaying both $h(t-\lambda)$ and $x(\lambda)$ for each region of interest
- Determine the range of t for which each part of your solution is valid
- Set up any necessary integrals to compute $y(t)$ **Do Not Evaluate the Integrals**

7. **Pre-Lab Exercises (to be done by all students. Turn this in with your homework and bring a copy of this with you to lab!)**

a) Calculate the impulse response of the RC lowpass filter shown in Figure 2, in terms of unspecified components R and C. Determine the time constant for the circuit.

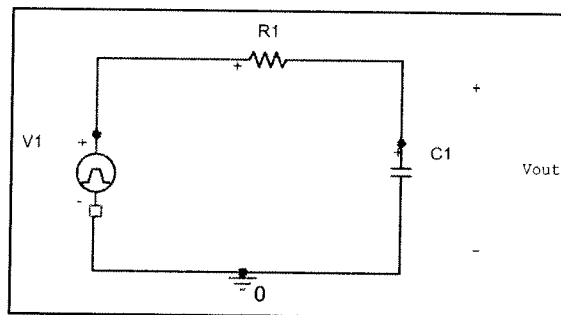
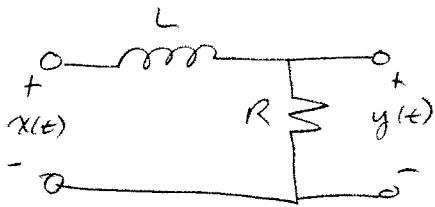


Figure 2. Simple RC lowpass filter circuit.

b) Find the **step response** of the circuit (the response of the system when the input is a unit step), and determine the 10-90% rise time, t_r , as shown below in Figure 3. The rise time is simply the amount of time necessary for the output to rise from 10% to 90% of its final value. Specifically, show that the rise time is given by $t_r = \tau \ln(9)$

ZTF Problem 2-19



$$V_L(t) = L \frac{di(t)}{dt}$$

$$V_L(t) = x(t) - y(t)$$

$$i(t) = \frac{y(t)}{R}$$

$$\text{So } x(t) - y(t) = L \frac{\dot{y}(t)}{R}$$

$$\frac{L}{R} \dot{y}(t) + y(t) = x(t)$$

$$\dot{y}(t) + \frac{R}{L} y(t) = \frac{R}{L} x(t)$$

for impulse response $x(t) \rightarrow \delta(t)$
 $y(t) \rightarrow h(t)$
 initial conditions are zero

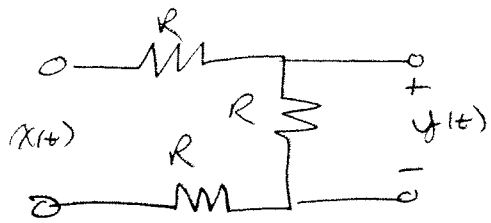
$$\dot{h}(t) + \frac{R}{L} h(t) = \frac{R}{L} \delta(t)$$

$$\frac{d}{dt} (h(t) e^{\frac{R}{L}t}) = e^{\frac{R}{L}t} \frac{R}{L} \delta(t)$$

$$\int_{-\infty}^t \frac{d}{d\lambda} (h(\lambda) e^{\frac{R}{L}\lambda}) d\lambda = h(t) e^{\frac{R}{L}t} = \int_{-\infty}^t e^{\frac{R}{L}\lambda} \frac{R}{L} \delta(\lambda) d\lambda = \frac{R}{L} u(t)$$

$$h(t) = \frac{R}{L} e^{-\frac{R}{L}t} u(t)$$

ZTF Problem 2-20.

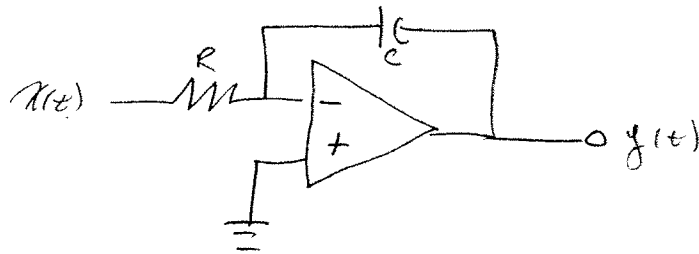


$$y(t) = x(t) \frac{R}{3R} = \frac{x(t)}{3}$$

impulse response $x(t) \rightarrow \delta(t)$
 $y(t) \rightarrow h(t)$

$$h(t) = \frac{1}{3} \delta(t)$$

ZTF Problem 2-24



$$\frac{x(t)}{R} + C \frac{dy(t)}{dt} = 0 \quad V_c(t) = y(t)$$

$$C \frac{dy(t)}{dt} + \frac{x(t)}{R} = 0$$

$$\frac{dy(t)}{dt} + \frac{1}{RC} x(t) = 0$$

for impulse response $x(t) \rightarrow \delta(t)$

$y(t) \rightarrow h(t)$

initial conditions are zero

$$\dot{h}(t) + \frac{1}{RC} \delta(t) = 0$$

$$\frac{dh}{dt} = -\frac{1}{RC} \delta(t)$$

$$\int_{-\infty}^t \frac{dh(\lambda)}{d\lambda} d\lambda = \int_{-\infty}^t -\frac{1}{RC} \delta(\lambda) d\lambda$$

$$h(t) = -\frac{1}{RC} u(t)$$

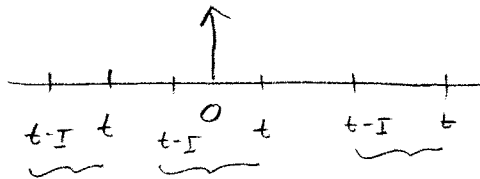
$$y(t) = h(t) * x(t) = \int_{-\infty}^{\infty} h(t-\lambda) x(\lambda) d\lambda = \int_{-\infty}^{\infty} -\frac{1}{RC} u(t-\lambda) x(\lambda) d\lambda$$

$$y(t) = -\frac{1}{RC} \int_{-\infty}^t x(\lambda) d\lambda$$

$$\textcircled{\#3} \quad y(t) = \frac{1}{I} \int_{t-I}^t x(\lambda) d\lambda$$

a) impulse response

$$h(t) = \frac{1}{I} \int_{t-I}^t \delta(\lambda) d\lambda$$



$$= \frac{1}{I} \text{ for } t > 0 \text{ and } t-I < 0$$

$$= \frac{1}{I} \text{ for } t > 0 \text{ and } t < I$$

$$h(t) = \frac{1}{I} [u(t) - u(t-I)]$$

b) unit step response

$$y(t) = h(t) * u(t) = \int_{-\infty}^{\infty} h(\lambda) u(t-\lambda) d\lambda$$

$$= \frac{1}{I} \int_{-\infty}^{\infty} [u(\lambda) - u(\lambda-I)] u(t-\lambda) d\lambda = \frac{1}{I} \int_{-\infty}^{\infty} u(\lambda) u(t-\lambda) d\lambda - \frac{1}{I} \int_{-\infty}^{\infty} u(\lambda-I) u(t-\lambda) d\lambda$$

$$u(\lambda) = 1 \quad \lambda > 0$$

$$u(t-\lambda) = 1 \quad t-\lambda > 0 \quad t > \lambda$$

$$u(\lambda-I) = 1 \quad \lambda-I > 0 \quad \lambda > I$$

$$y(t) = \frac{1}{I} \left[\int_0^t d\lambda + \int_I^t d\lambda \right] = \frac{1}{I} [t u(t) + (t-I) u(t-I)]$$

need $t > 0$
need $t > I$

$$\text{step response} = \frac{1}{I} [t u(t) - (t-I) u(t-I)]$$

c) ramp response

$$\begin{aligned}y(t) &= h(t) * r(t) = \int_{-\infty}^{\infty} r(\lambda) h(t-\lambda) d\lambda \\&= \int_{-\infty}^{\infty} \lambda u(\lambda) \frac{1}{I} [u(t-\lambda) - u(t-I-\lambda)] d\lambda \\&= \frac{1}{I} \int_{-\infty}^{\infty} \lambda u(\lambda) u(t-\lambda) d\lambda - \frac{1}{I} \int_{-\infty}^{\infty} \lambda u(\lambda) u(t-I-\lambda) d\lambda \\&= \frac{1}{I} \int_0^t \lambda d\lambda - \frac{1}{I} \int_0^{t-I} \lambda d\lambda = \frac{1}{I} \frac{t^2}{2} u(t) - \frac{1}{I} \frac{(t-I)^2}{2} u(t-I)\end{aligned}$$

$$\text{ramp response} = \frac{1}{I} \left[\frac{t^2}{2} u(t) - \frac{(t-I)^2}{2} u(t-I) \right]$$

$$\begin{aligned}d) \text{ for } t > I \text{ ramp response} &= \frac{1}{I} \left[\frac{t^2}{2} - \frac{(t-I)^2}{2} \right] \\&= \frac{1}{I} \left[\frac{t^2}{2} - \frac{(t^2 - 2tI + I^2)}{2} \right] \\&= \frac{1}{2I} [2tI - I^2] = t - \frac{I}{2}\end{aligned}$$

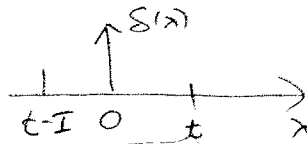
$$\text{input} = t \quad \text{output} = t - I/2 \quad \boxed{\text{delay} = I/2}$$

#3 (Alternative Solution)

$$y(t) = \frac{1}{I} \int_{t-I}^t x(\lambda) d\lambda \quad I > 0 \quad \text{continuous-time moving average filter}$$

a) assume $x(t) = \delta(t)$ so $y(t) = \frac{1}{I} \int_{t-I}^t \delta(\lambda) d\lambda$

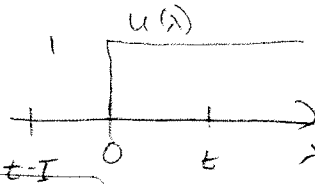
draw a picture!


 $y(t) = \frac{1}{I}$ if $\delta(\lambda)$ is in the region of integration

$$y(t) = \begin{cases} \frac{1}{I} & 0 < t < I \\ 0 & \text{else} \end{cases} = \frac{1}{I} [u(t) - u(t-I)]$$

b) assume $x(t) = u(t)$ so $y(t) = \frac{1}{I} \int_{t-I}^t u(\lambda) d\lambda$

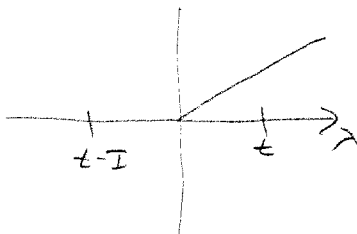
draw a picture!



$$y(t) = \begin{cases} \frac{t}{I} & 0 < t < I \\ 1 & t \geq I \\ 0 & \text{else} \end{cases} = \frac{1}{I} [t u(t) - (t-I) u(t-I)]$$

c) assume $x(t) = t u(t)$ so $y(t) = \frac{1}{I} \int_{t-I}^t \lambda u(\lambda) d\lambda$

draw a picture!

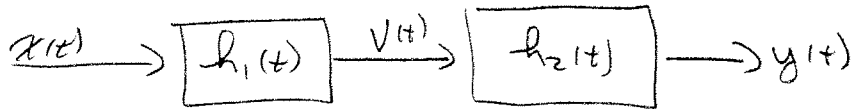


$$\text{for } 0 < t < I \quad y(t) = \frac{1}{I} \int_0^t \lambda^2 d\lambda = \frac{t^2}{2I}$$

$$\text{for } t \geq I \quad y(t) = \frac{1}{I} \int_{t-I}^t \lambda^2 d\lambda = \frac{t^2 - (t-I)^2}{2I}$$

$$y(t) = \begin{cases} \frac{t^2}{2I} & 0 < t \leq I \\ \frac{t^2 - (t-I)^2}{2I} & t \geq I \\ 0 & \text{else} \end{cases}$$

#4



Note $v(t) = h_1(t) * x(t)$

$$y(t) = h_2(t) * v(t) = h_2(t) * (h_1(t) * x(t)) = (h_1(t) * h_2(t)) * x(t)$$

so $h(t) = h_1(t) * h_2(t)$

a) $h_1(t) = \delta(t)$ $h_2(t) = 2e^{-t}u(t)$

$$h(t) = \int_{-\infty}^{\infty} h_1(t-\lambda) h_2(\lambda) d\lambda = \int_{-\infty}^{\infty} \delta(t-\lambda) 2e^{-\lambda} u(\lambda) d\lambda$$

$$= \boxed{2e^{-t}u(t) = h(t)}$$

note $h(t) * \delta(t) = h(t)$ (no need to do the math!)

b) $h_1(t) = e^{-t}u(t)$ $h_2(t) = 2\delta(t-1)$

$$h(t) = h_1(t) * h_2(t) = \boxed{2e^{-(t-1)}u(t-1) = h(t)}$$

using LTI property

c) $h_1(t) = e^{-t}u(t)$ $h_2(t) = e^{t}u(t)$

$$h(t) = \int_{-\infty}^{\infty} h_1(t-\lambda) h_2(\lambda) d\lambda = \int_{-\infty}^{\infty} e^{-(t-\lambda)} u(t-\lambda) e^{\lambda} u(\lambda) d\lambda$$

$$= e^{-t} \int_{-\infty}^{\infty} u(t-\lambda) u(\lambda) d\lambda = e^{-t} \int_0^t d\lambda = \boxed{te^{-t}u(t) = h(t)}$$

d) $h_1(t) = 2\delta(t-1)$ $h_2(t) = 3\delta(t-2)$

$$h(t) = h_1(t) * h_2(t) = \boxed{6\delta(t-3) = h(t)}$$

using LTI

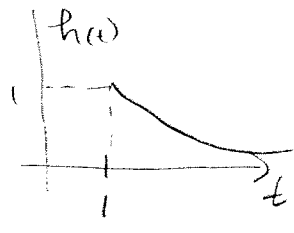
e) $h_1(t) = 2\delta(t-1)$ $h_2(t) = u(t)$

$$h(t) = h_1(t) * h_2(t) = \boxed{2u(t-1) = h(t)}$$

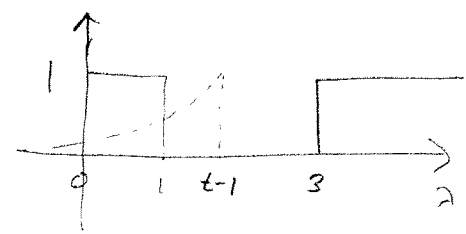
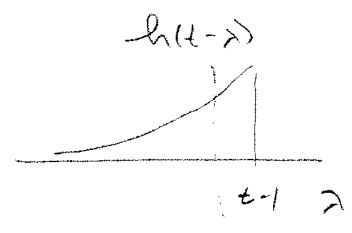
using LTI

#5

$h(t) = e^{-(t-1)} u(t-1)$ $x(t) = u(t) - u(t-1) + u(t-3)$

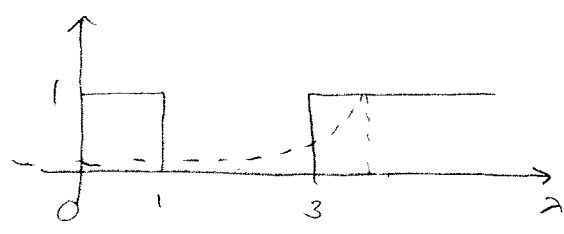


$h(\lambda) = h(t-\lambda)$
 $1 = t-\lambda$
 $\lambda = t-1$



$2 \leq t \leq 4$

$$y(t) = \int_0^1 e^{-(t-\lambda-1)} d\lambda = e^{-(t-1)} \int_0^1 e^\lambda d\lambda = e^{-(t-1)} [e^1 - 1]$$



$t > 4$

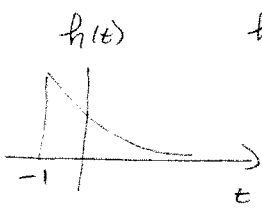
$$\begin{aligned} y(t) &= \int_0^1 e^{-(t-\lambda-1)} d\lambda + \int_3^{t-1} e^{-(t-\lambda-1)} d\lambda \\ &= e^{-(t-1)} [e^1 - 1] + e^{-(t-1)} [e^\lambda]_3^{t-1} \\ &= e^{-(t-1)} [e^1 - 1] + e^{-(t-1)} [e^{t-1} - e^3] \end{aligned}$$

$$y(t) = \begin{cases} e^{-(t-1)} [e^1 - 1] & 2 \leq t \leq 4 \\ e^{-(t-1)} [e^1 - 1] + e^{-(t-1)} [e^{t-1} - e^3] & 4 \leq t \end{cases}$$

#16

$$h(t) = e^{-(t+1)} u(t+1)$$

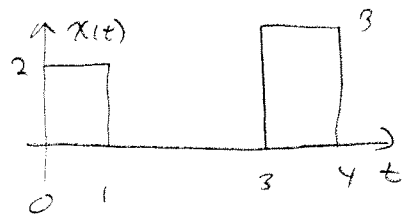
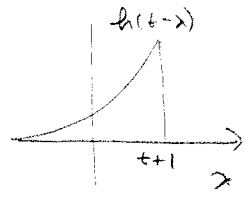
$$x(t) = 2[u(t) - u(t-1)] + 3[u(t-3) - u(t-4)]$$



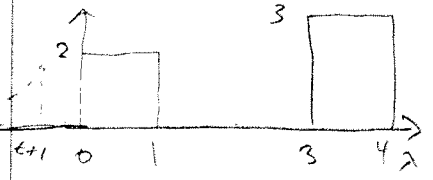
$$h(-1) = h(t-\lambda)$$

$$-1 = t-\lambda$$

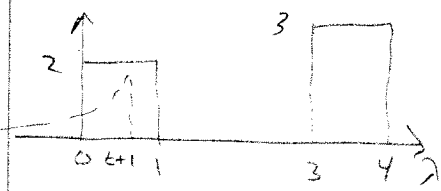
$$\lambda = t+1$$



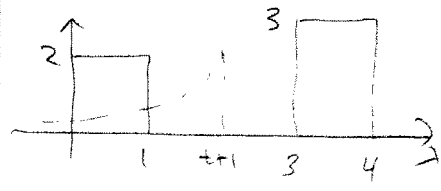
Case 1



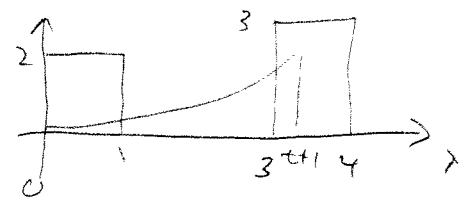
$$t \leq -1 \quad y(t) = 0$$



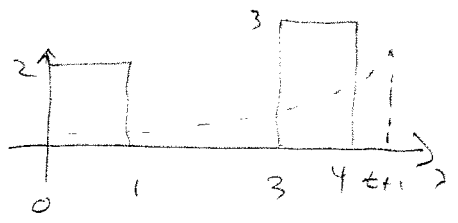
$$-1 \leq t \leq 0 \quad y(t) = \int_0^{t+1} e^{-(t-\lambda+1)} 2 d\lambda$$



$$0 \leq t \leq 2 \quad y(t) = \int_0^1 e^{-(t-\lambda+1)} 2 d\lambda$$

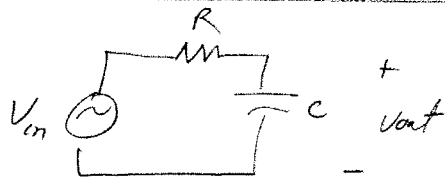


$$2 \leq t \leq 3 \quad y(t) = \int_0^1 e^{-(t-\lambda+1)} 2 d\lambda + \int_3^{t+1} e^{-(t-\lambda+1)} 3 d\lambda$$



$$t \geq 3 \quad y(t) = \int_0^1 e^{-(t-\lambda+1)} 2 d\lambda + \int_3^4 e^{-(t-\lambda+1)} 3 d\lambda$$

#17



a)

$$\frac{V_{in} - V_{out}}{R} = C \frac{dV_{out}}{dt}$$

$$CR \frac{dV_{out}}{dt} + V_{out} = V_{in}$$

$$\frac{dV_{out}}{dt} + \frac{1}{RC} V_{out} = \frac{1}{RC} V_{in}$$

$$\frac{d}{dt} \left(e^{t/RC} V_{out} \right) = \frac{1}{RC} V_{in} e^{t/RC}$$

$$\int_{-\infty}^t \frac{d}{dt} \left(e^{t/RC} V_{out}(t) \right) dt = e^{t/RC} V_{out} = \int_{-\infty}^t \frac{1}{RC} e^{t/RC} V_{in}(\lambda) d\lambda$$

for impulse response $V_{in}(t) = \delta(t)$ $V_{out}(t) = h(t)$

$$e^{t/RC} h(t) = \int_{-\infty}^t \frac{1}{RC} e^{t/RC} \delta(\lambda) d\lambda = \frac{1}{RC} u(t)$$

$$h(t) = \frac{1}{RC} e^{-t/RC} u(t)$$

$$\tau = RC$$

$$\text{or } \frac{V_{out}(s)}{V_{in}(s)} = \frac{1/s}{R + 1/s} = \frac{1}{RCs + 1} = \frac{1}{RC} \frac{1}{s + 1/RC} \Rightarrow h(t) = \frac{1}{RC} e^{-t/RC} u(t)$$

b) $h(t) = \frac{1}{\tau} e^{-t/\tau} u(t)$

$$y(t) = h(t) * u(t) = \int_{-\infty}^t h(\lambda) u(t-\lambda) d\lambda = \int_0^t \frac{1}{\tau} e^{-t/\tau} d\tau = -e^{-t/\tau} \Big|_0^t$$

$$y(t) = [1 - e^{-t/\tau}] u(t)$$

For rise time $0.9 = 1 - e^{-t_0/\tau}$

$$0.1 = 1 - e^{-t_1/\tau}$$

$$\text{or } 0.1 = e^{-t_0/\tau}$$

$$\text{or } 0.9 = e^{-t_1/\tau}$$

taking ratios

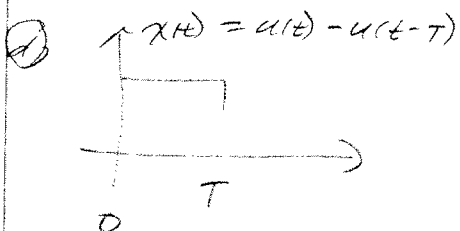
$$q = e^{-(t_1 - t_0)/\tau} = e^{(t_0 - t_1)/\tau} = e^{t_0/\tau} e^{-t_1/\tau}$$

$$\ln q = t_0/\tau$$

$$\tau = \frac{t_0}{\ln q}$$

#17 (continued)

(c) up to you, but ϵ should be small



for $x(t) = u(t)$ $y(t) = [1 - e^{-t/\tau}]u(t)$

since LTI for $x(t) = u(t) - u(t-T)$, $y(t) = [1 - e^{-t/\tau}]u(t) - [1 - e^{-(t-T)/\tau}]u(t-T)$

(e) see plots

(f) For $x(t) = A[u(t) - u(t-T)]$ the output is

$$y(t) = A[1 - e^{-t/\tau}]u(t) - A[1 - e^{-(t-T)/\tau}]u(t-T)$$

$$y(T) = A[1 - e^{-T/\tau}]$$

for $T/\tau \ll 1$ $e^{-T/\tau} \approx 1 - T/\tau$

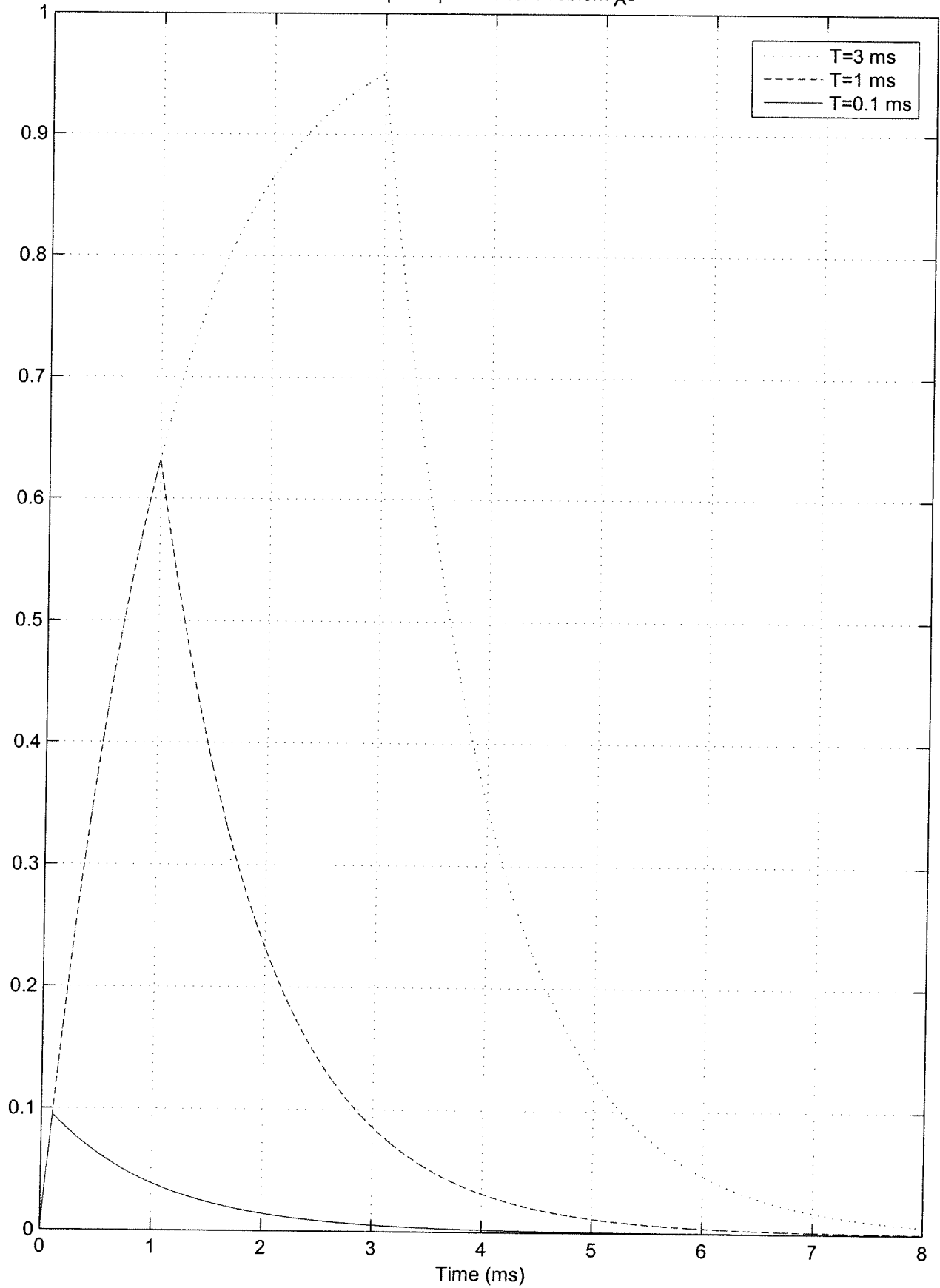
$$y(T) \approx A[1 - (1 - T/\tau)] = \boxed{\frac{AT}{\tau} = y(T)}$$

```
%
% step response plot for homework 3 (prelab for impulse response lab)
%
t = linspace(0,0.008,10000);
tau = 0.001;
%
T = 0.003;
y1 = (1-exp(-t/tau)).*unit_step(t,0)-(1-exp(-(t-T)/tau)).*unit_step(t,T);
T = 0.001;
y2 = (1-exp(-t/tau)).*unit_step(t,0)-(1-exp(-(t-T)/tau)).*unit_step(t,T);
T = 0.0001;
y3 = (1-exp(-t/tau)).*unit_step(t,0)-(1-exp(-(t-T)/tau)).*unit_step(t,T);
orient tall

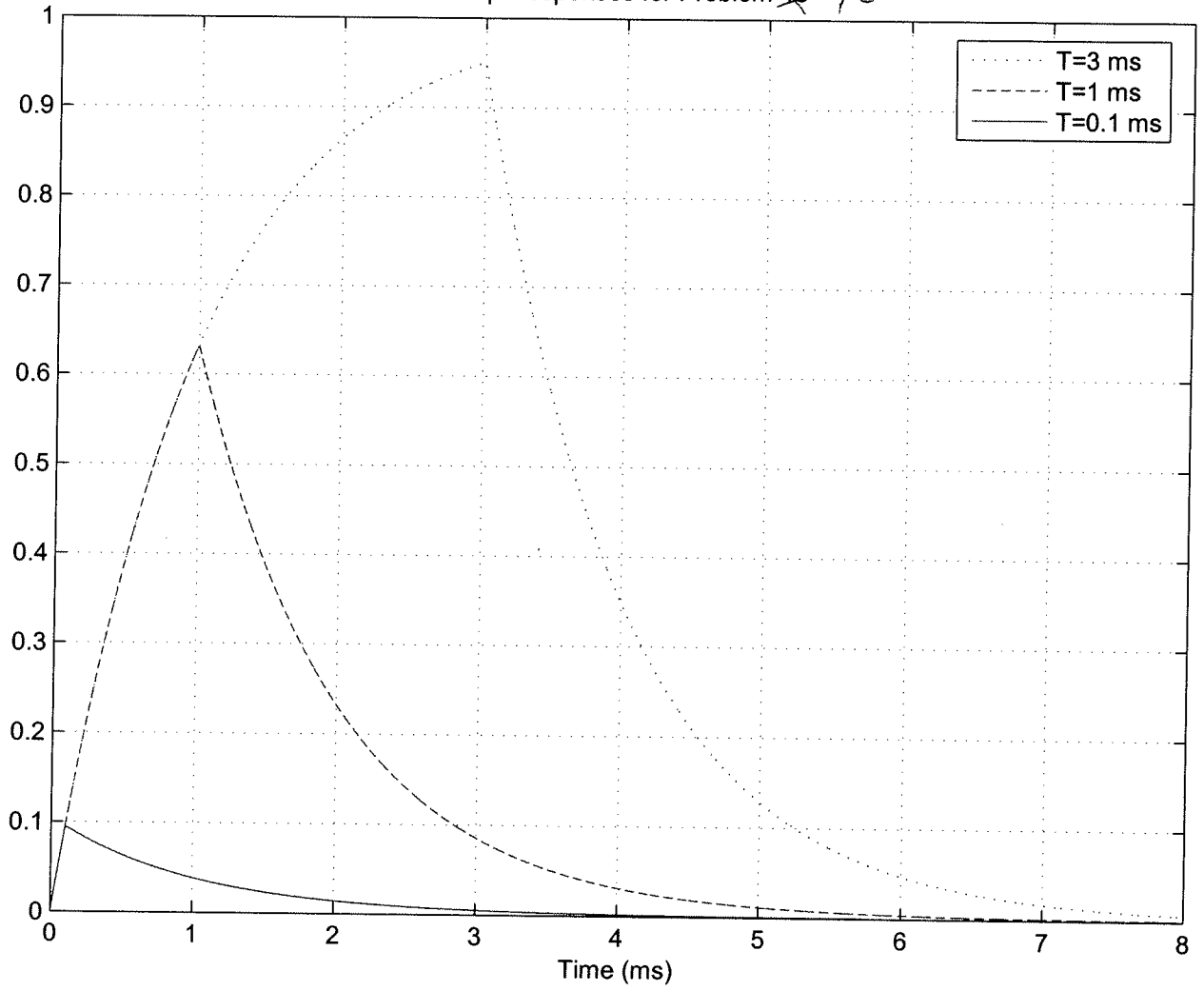
plot(t*1000,y1,':',t*1000,y2,'--',t*1000,y3,'-'); grid;
legend('T=3 ms','T=1 ms','T=0.1 ms');
xlabel('Time (ms)'); title('Step Responses for Problem 8e');

figure;
orient tall
subplot(3,1,1); plot(t*1000,y1); grid; ylabel('T = 3 ms'); xlabel('Time (ms)');
title('Results for Problem 8e');
subplot(3,1,2); plot(t*1000,y2); grid; ylabel('T = 1 ms'); xlabel('Time (ms)');
subplot(3,1,3); plot(t*1000,y3); grid; ylabel('T = 0.1 ms'); xlabel('Time (ms)');
```

Step Responses for Problem 8e



Step Responses for Problem ~~4e~~ 7e



Results for Problem 8e

