

ECE 300
Signals and Systems
Homework 7

Due Date: Tuesday April 24 at the beginning of class

Exam 2, Thursday April 26

Problems:

1. A periodic signal $x(t)$ is the input to an LTI system with output $y(t)$. The signal $x(t)$ has period 2 seconds, and is given over one period as

$$x(t) = e^{-t} \quad 0 < t < 2$$

$x(t)$ has the Fourier series representation

$$x(t) = \sum_k \frac{0.4323}{1 + jk\pi} e^{jk\pi t}$$

The system is an ideal lowpass filter that eliminates all signals with frequency content higher than 1.25 Hz.

- a) Find the average power in $x(t)$.
 - b) Determine an expression for the output, $y(t)$. Your expression for $y(t)$ must be real.
 - c) Determine the average power in $y(t)$.
 - d) Plot the spectrum (magnitude and phase) for $x(t)$. Include the DC through second harmonic. Accurately label your plot.
2. Assume $x(t) = t^2 \quad -\pi \leq t \leq \pi$ with Fourier Series representation

$$x(t) = \sum_k a_k e^{jkt}$$

where

$$a_k = \begin{cases} \frac{\pi^2}{3} & k = 0 \\ \frac{2(-1)^k}{k^2} & k \neq 0 \end{cases}$$

- a) Assume $x(t)$ is the input to a system that eliminates all signals with frequencies outside the range 0.5 to 0.7 Hz. What is the output of the system $y(t)$ and what fraction of the average power in $x(t)$ is in $y(t)$? (Note: your answers must be real, no e^{ja} terms.)

b) Assume $x(t)$ is the input to a system that eliminates all signals with frequencies in the range 0.5 to 0.7 Hz. What is the output of the system $y(t)$ and what fraction of the average power in $x(t)$ is in $y(t)$?

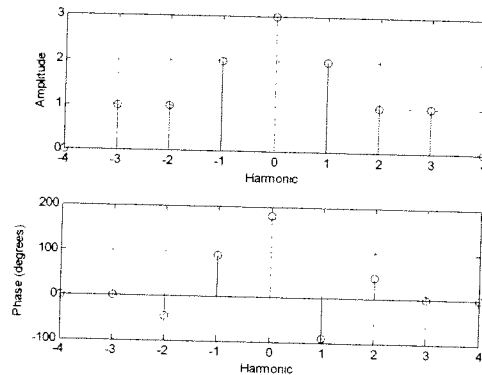
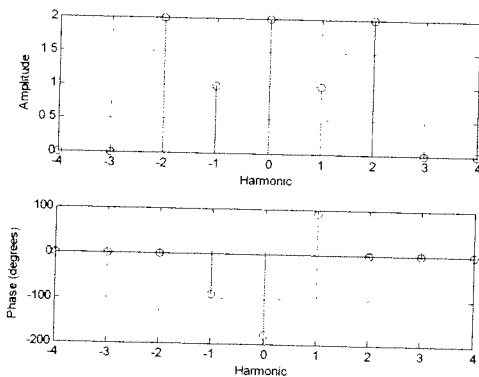
3. K & H, Problem 5.1. Use the example we did in class to get the Fourier series coefficients for part c.

4. K & H, Problem 5.3.

5. K & H, Problem 5.12. Note that $y(t) = x(t) - x(t-1)$. You need to write c_k^y in terms of c_k^x .

6. K & H, Problem 5.13.

7. The output of a LTI system, $y(t)$, has the following spectrum shown on the left, while the system transfer function, $H(k\omega_0)$, has the spectrum shown on the right. Assume all angles are multiples of 45 degrees.



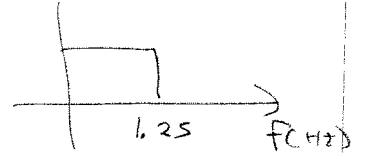
a) Determine (sketch) the spectrum (magnitude and phase) of the input to the system, $x(t)$.

b) If $x(t)$ has the fundamental period $T = 2$ seconds, determine an analytical expression for $x(t)$ in terms of sine, cosines, and constants.

Problem Set #7

E (E-300)

#1 $x(t) = e^{-t} \quad 0 < t < 2$ $x(t) = \sum_K \frac{0.4323}{1+jK\pi} e^{jK\pi t}$



(a) $P_{ave} = \frac{1}{2} \int_0^2 e^{-2t} dt$

$= \frac{1}{2} \left. \frac{e^{-2t}}{-2} \right|_0^2 = \frac{1}{4} (1 - e^{-4}) = 0.24542 = P_{ave}$

(b)

K	Kf ₀
0	0
1	1/2
2	1
3	3/2
4	2

$c_0 = 0.4323$

$c_1 = \frac{0.4323}{1+j\pi} = 0.1311 \angle -72.34^\circ$

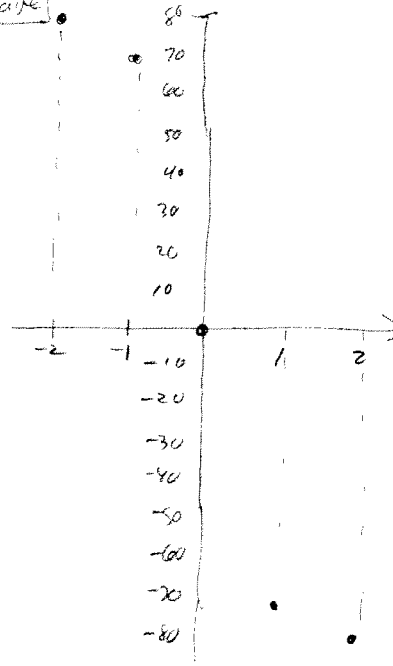
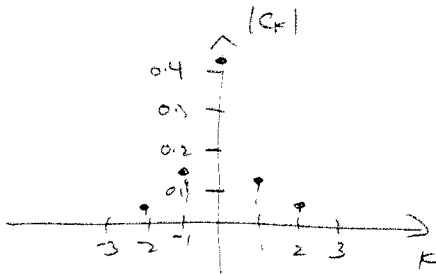
$c_2 = \frac{0.4323}{1+j2\pi} = 0.0680 \angle -80.96^\circ$

$y(t) = c_0 + 2|c_1| \cos(\omega_c t + \angle c_1) + 2|c_2| \cos(2\omega_c t + \angle c_2)$

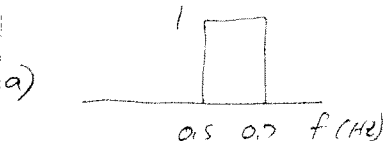
$y(t) = 0.4323 + 0.2622 \cos(\pi t - 72.34^\circ) + 0.1360 \cos(2\pi t - 80.96^\circ)$

(c) $P_{ave}^y = |c_0|^2 + 2|c_1|^2 + 2|c_2|^2 = 0.2305 = P_{ave}^x$

(d)



#2 $x(t) = t^2 \quad -\pi \leq t \leq \pi$ $x(t) = \frac{\pi^2}{3} + \sum_{k \neq 0} \frac{2(-1)^k}{k^2} e^{jk t}$



Remove all signals with frequencies outside 0.5 to 0.7 Hz

$f_0 = \frac{1}{T_0} = \frac{1}{2\pi} = 0.15915$

k	k f ₀
0	0
1	0.15915
2	0.31831
3	0.47746
4	0.63662
5	0.79577

$c_4 = \frac{2(-1)^4}{4^2} = 0.125 \angle 0^\circ$

$y(t) = 2|c_4| \cos(4\omega_0 t + \angle c_4) = 2(0.125) \cos(4t) = \boxed{0.25 \cos(4t) = y(t)}$

$P_{ave}^x = \frac{1}{2\pi} \int_{-\pi}^{\pi} t^4 dt = \frac{1}{2\pi} \left. \frac{t^5}{5} \right|_{-\pi}^{\pi} = \frac{1}{10\pi} 2\pi^5 = \frac{\pi^4}{5} = \boxed{19.4818 = P_{ave}^x}$

$P_{ave}^y = 2|c_4|^2 = 0.03125$

$\frac{P_{ave}^y}{P_{ave}^x} = \frac{0.03125}{19.48} = 0.0016 = \boxed{0.16\% = \frac{P_{ave}^y}{P_{ave}^x}}$

b) $y(t) = t^2 - 0.25 \cos(4t)$

$P_{ave}^y = P_{ave}^x - 0.03125 = 19.4505$

$\frac{P_{ave}^y}{P_{ave}^x} = \frac{19.4505}{19.4818} = 0.9984$

$\boxed{99.84\% = \frac{P_{ave}^y}{P_{ave}^x}}$

#3

S.T

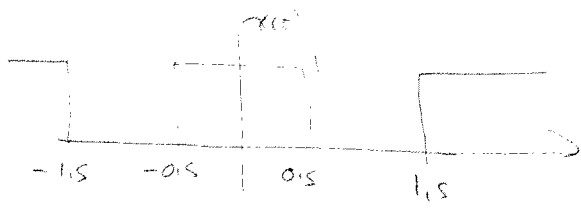
$$H(\omega) = \begin{cases} 1 & 2 \leq |\omega| \leq 4 \\ 0 & \text{all other } \omega \end{cases}$$

$$x(t) \rightarrow \boxed{H} \rightarrow y(t)$$

a) $x(t) = 2 + 3\cos(3t) - 5\sin(\omega t - 30^\circ) + 4\cos(13t - 20^\circ)$

b) $x(t) = 1 + \sum_{k=1}^{\infty} \frac{1}{k} \cos(2kt)$

c) $x(t)$ shown below



a) $y(t) = 2H(\omega) + 3|H(3)|\cos(3t + \angle H(3)) - 5|H(\omega)|\sin(\omega t - 30^\circ + \angle H(\omega)) + 4|H(13)|\cos(13t - 20^\circ + \angle H(13))$

$$y(t) = 3\cos(3t) - 5\sin(\omega t - 30^\circ)$$

b) $y(t) = 1H(\omega) + \sum_{k=1}^{\infty} \frac{1}{k}|H(2k)|\cos(2kt + \angle H(2k))$

$$y(t) = \cos(2t) + \frac{1}{2}\cos(4t) + \frac{1}{3}\cos(6t)$$

c) $C_k^x = \frac{A_x}{T_0} \text{sinc}\left(\frac{kT}{T_0}\right) = \frac{(1)(1)}{2} \text{sinc}\left(\frac{k}{2}\right) = \frac{1}{2} \text{sinc}\left(\frac{k}{2}\right)$

$T_0 = 2$ $\omega_0 = \frac{2\pi}{T_0} = \pi$

$$x(t) = \sum_k \frac{1}{2} \text{sinc}\left(\frac{k}{2}\right) e^{jk\pi t}$$

For $k=0$ $\omega=0$
 $k=1$ $\omega=\pi$
 $k=2$ $\omega=2\pi$
 $k=3$ $\omega=3\pi$ } only terms

$C_1^y = C_1^x H(\pi) = \frac{1}{2} \text{sinc}\left(\frac{1}{2}\right) = \frac{1}{\pi}$

$C_2^y = C_2^x H(2\pi) = \frac{1}{2} \text{sinc}\left(\frac{2}{2}\right) = 0$

$$y(t) = 2|C_1^y| \cos(\omega_0 t + \angle C_1^y) = \frac{2}{\pi} \cos(\pi t) = y(t)$$

22-141 50 SHEETS
 22-142 100 SHEETS
 22-144 200 SHEETS



5.3

$$H(\omega) = \frac{1}{j\omega + 1}$$

$$x \rightarrow \boxed{H} \rightarrow y$$

$$a) x(t) = \cos(t)$$

$$b) x(t) = \cos(t + 45^\circ)$$

$$\omega_0 = 1 \quad H(j\omega_0) = \frac{1}{1+j} = \frac{1}{\sqrt{2}} \angle -45^\circ$$

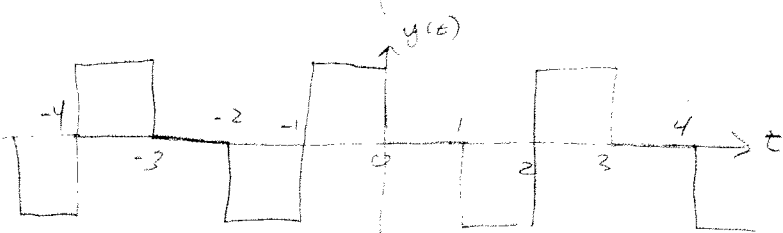
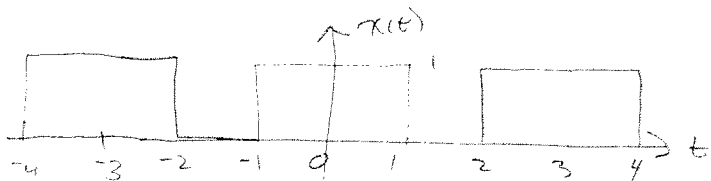

$$a) y(t) = |H(j\omega_0)| \cos(\omega_0 t + \angle H(j\omega_0)) = \boxed{\frac{1}{\sqrt{2}} \cos(t - 45^\circ) = y(t)}$$

$$b) y(t) = |H(j\omega_0)| \cos(\omega_0 t + \angle H(j\omega_0) + 45^\circ) = \boxed{\frac{1}{\sqrt{2}} \cos(t) = y(t)}$$

#5

S.12 $H(\omega) = b - a e^{j\omega c} \quad -\infty < \omega < \infty$

a, b, c are real numbers



$y(t) = x(t) - x(t-1)$

$C_K^x = \frac{1}{T_0} \int_{T_0} x(t) e^{-jk\omega_0 t} dt$

$C_K^y = \frac{1}{T_0} \int_{T_0} y(t) e^{-jk\omega_0 t} dt = \frac{1}{T_0} \int_{T_0} [x(t) - x(t-1)] e^{-jk\omega_0 t} dt$

$= \frac{1}{T_0} \int_{T_0} x(t) e^{-jk\omega_0 t} dt - \frac{1}{T_0} \int_{T_0} x(t-1) e^{-jk\omega_0 t} dt$

C_K^x

Let $\lambda = t-1 \quad \lambda+1 = t$
 $d\lambda = dt$

limits don't change since still integrating over one period

$-\frac{1}{T_0} \int_{T_0} x(\lambda) e^{-jk\omega_0(\lambda+1)} d\lambda$

$= -e^{-jk\omega_0} \left[\frac{1}{T_0} \int_{T_0} x(\lambda) e^{-jk\omega_0 \lambda} d\lambda \right]$

$= -e^{-jk\omega_0} C_K^x$

So $C_K^y = C_K^x - e^{-jk\omega_0} C_K^x = (1 - e^{-jk\omega_0}) C_K^x$

but $C_K^y = C_K^x H(k\omega_0) \Rightarrow H(k\omega_0) = 1 - e^{-jk\omega_0}$

$\Rightarrow a = b = 1 \quad c = -1$

22-141 50 SHEETS
 22-142 100 SHEETS
 22-144 200 SHEETS



#6

$$(5.13) \quad x(t) = 1 + 4\cos(2\pi t) + 8\sin(3\pi t - 90^\circ)$$

$$y(t) = 2 - 2\sin(2\pi t)$$

$$x \rightarrow \boxed{H} \rightarrow y$$

what is H ?

$$(b) \quad y(t) = 2 - 2\sin(2\pi t) = 1 H(0) + 4 |H(2\pi)| \cos(2\pi t + \angle H(2\pi)) + 8 |H(3\pi)| \sin(3\pi t - 90^\circ + \angle H(3\pi))$$

$$H(0) = 2 \quad H(3\pi) = 0$$

$$|H(2\pi)| = \frac{1}{2} \quad \angle H(2\pi) = +90^\circ$$

$$H(0) = 2 \quad H(2\pi) = \frac{1}{2} e^{j\pi/2} \quad H(3\pi) = 0$$

(a) we can only determine $H(\omega)$ at $\omega = 0, \omega = 2\pi, \omega = 3\pi$

(#7) (continued)

$$|C_2^x| = \frac{2}{1} \quad \angle C_2^x = (0) - (90^\circ) = -45^\circ$$

$$|C_3^x| = \frac{0}{1} = 0 \quad \angle C_3^x = (0) - (0) = 0^\circ$$

$$\text{so } C_0^x = \frac{2}{3} \angle 0^\circ$$

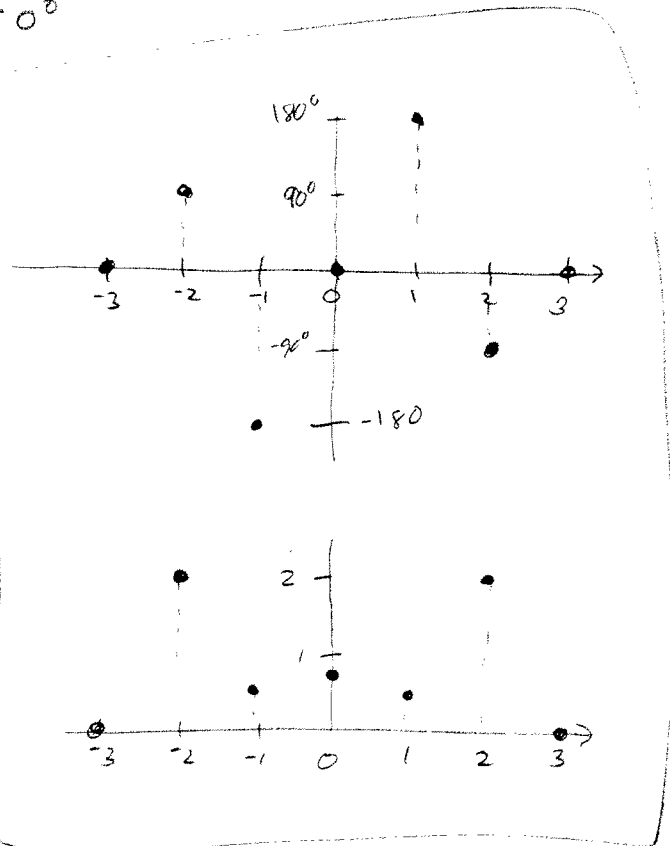
$$C_1^x = \frac{1}{2} \angle 180^\circ$$

$$C_2^x = 2 \angle -90^\circ$$

$$C_k^x = 0 \quad k \geq 3$$

use the relationships $|C_k^x| = |C_{-k}^x|$

$$\angle C_{-k}^x = -\angle C_k^x$$



$$x(t) = C_0^x + 2|C_1^x| \cos(\omega_0 t + \angle C_1^x) + 2|C_2^x| \cos(2\omega_0 t + \angle C_2^x)$$

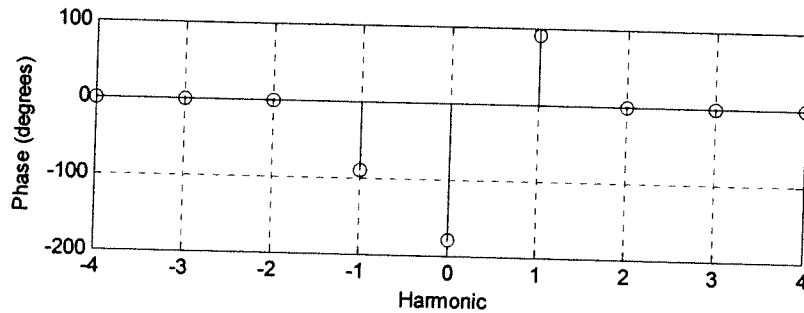
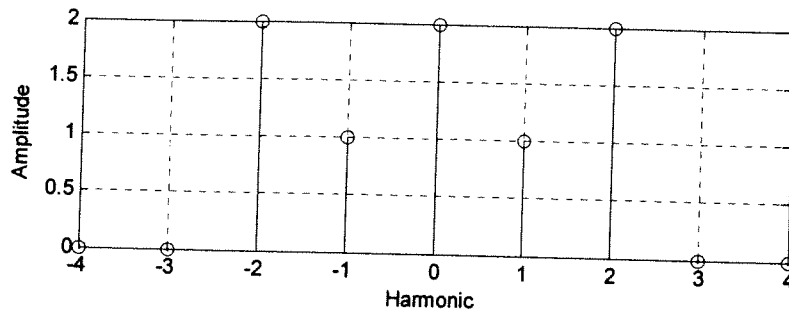
$$\omega_0 = \frac{2\pi}{2} = \pi$$

$$x(t) = \frac{2}{3} + \cos(\pi t + 180^\circ) + 4 \cos(2\pi t - 45^\circ)$$

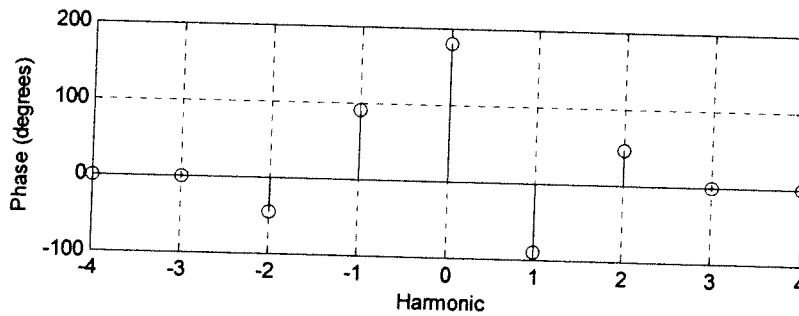
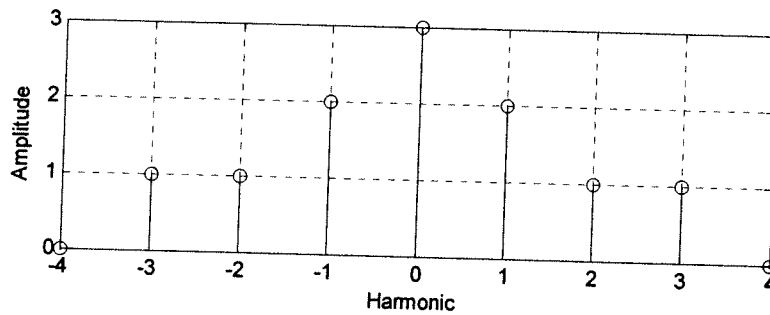
$$x(t) = \frac{2}{3} - \cos(\pi t) + 4 \cos(2\pi t - 45^\circ)$$

#7

8. The output of a LTI system, $y(t)$, has the following spectrum:



The system transfer function, $H(k\omega_0)$, has the following spectrum:



$$C_k^y = C_k^x H(jk\omega_0) \quad \text{or} \quad C_k^x = \frac{C_k^y}{H(jk\omega_0)} = \frac{|C_k^y| \angle C_k^y}{|H(jk\omega_0)| \angle H(jk\omega_0)}$$

$$|C_k^x| = \frac{|C_k^y|}{|H(jk\omega_0)|} \quad \angle C_k^x = \angle C_k^y - \angle H(jk\omega_0)$$

$$|C_0^x| = \frac{2}{3} \quad \angle C_0^x = (-180^\circ) - (-180^\circ) = -360^\circ = 0^\circ$$

$$|C_1^x| = \frac{1}{2} \quad \angle C_1^x = (90^\circ) - (-90^\circ) = 180^\circ$$

(continued)