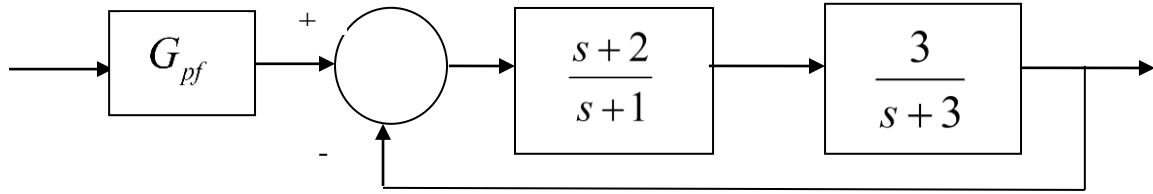


Quiz #9

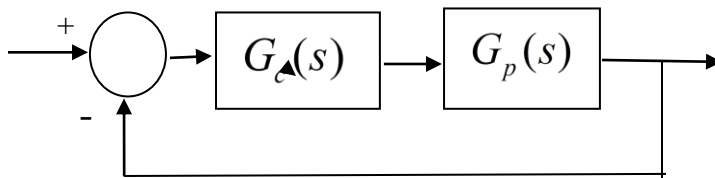
1) For the following system:



the value of the prefilter G_{pf} that produces **a steady state error** of zero for a unit step input is:

- a) 1 b) 3/2 c) 5/2 d) 1/3

2) For the following system



the pole of the controller $G_c(s)$ is at -15

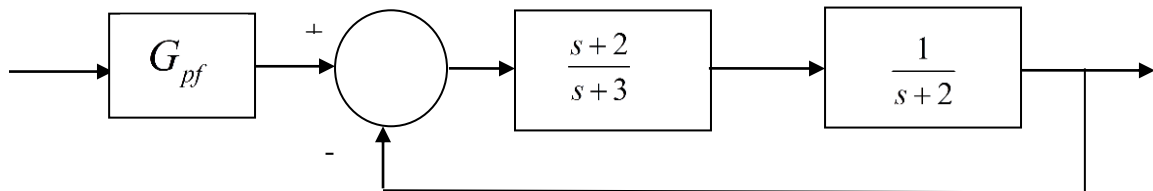
the poles of the plant $G_p(s)$ are at -1 and -2

the poles of the closed loop system are at -7.1, -5.43 +3.98j, -5.43 -3.98j

The best estimate of the settling time of the closed loop system is

- a) 4 seconds b) $\frac{4}{15}$ seconds c) $\frac{4}{7.1}$ seconds d) $\frac{4}{5.43}$ seconds

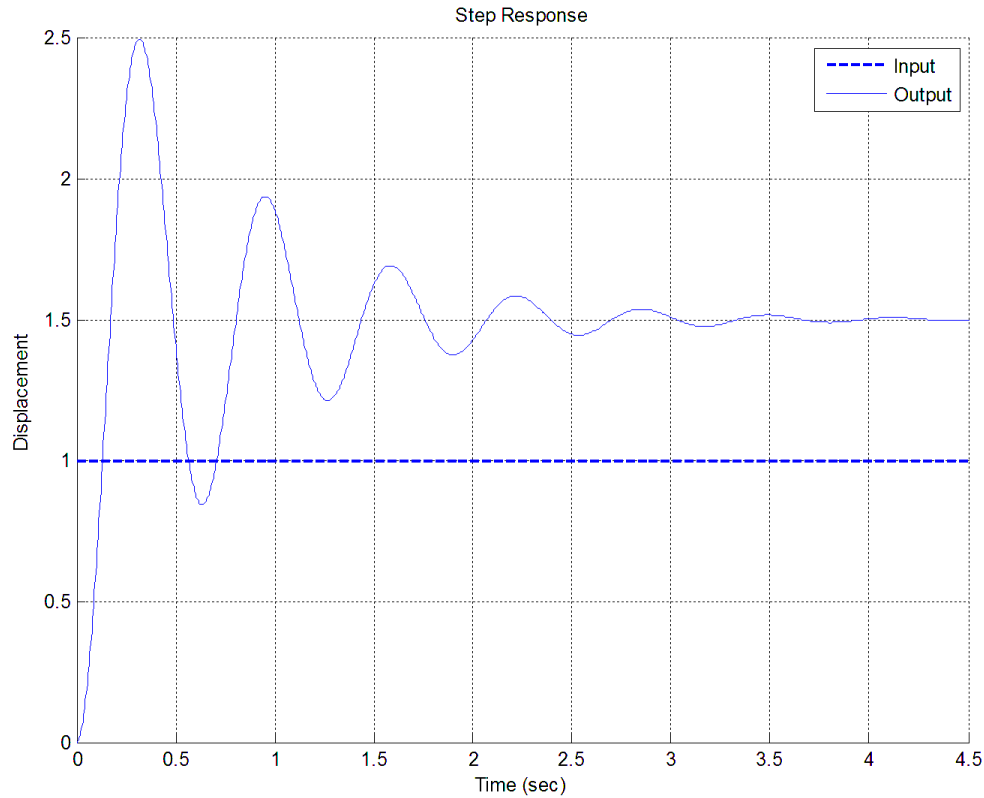
3) For the following system:



the value of the prefilter G_{pf} that produces **a steady state error** of zero for a unit step input is:

- a) 1 b) 3/2 c) 4 d) 1/3

Problems 4 and 5 refer to the **unit step response** of a system, shown below



4) The best estimate of the **steady state error** for a unit step input is

- a) 0.5 b) -0.5 c) 1.5 d) -1.5 e) none of these

5) The best estimate of the **percent overshoot** is

- a) 200% b) 100% c) 67% d) 50% e) none of these

6) The **unit step response** of a system is given by $y(t) = -u(t) - t^4 e^{-t} u(t) + e^{-2t} u(t)$

The **steady state error** for a unit step input for this system is best estimated as

- a) ∞ b) 0.5 c) 2.0 d) impossible to determine

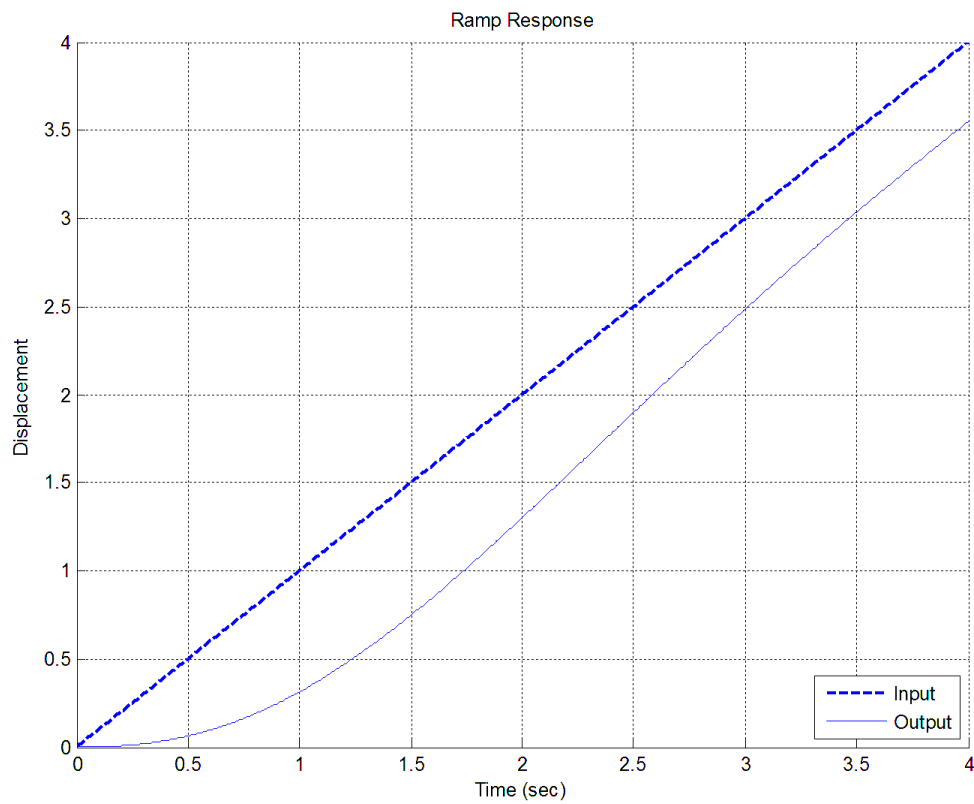
7) The **unit ramp response** of a system is given by $y(t) = -2u(t) + tu(t) + e^{-t}u(t)$.

The best estimate of the **steady state error** is

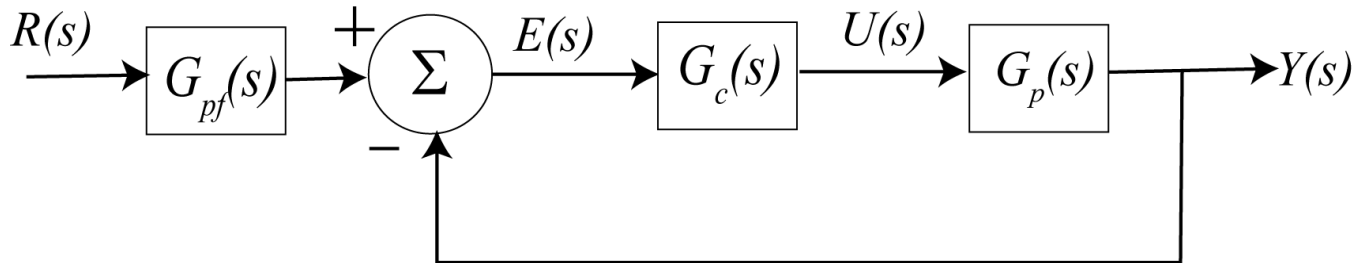
- a) 0.5 b) 2.0 c) 1.0 d) ∞

8) For a system with unit ramp response shown below, the best estimate of the **steady state error** is

- a) 0.5 b) -0.5 c) 0.8 d) -0.8 e) 0.0 f) none of these



Problems 9-12 refer to the following feedback system, with the plant $G_p(s) = \frac{4}{s+1}$ and proportional controller, $G_c(s) = k_p$



9) What is the (2%) settling time of the plant ?

- a) 1 second b) 2 seconds c) 3 seconds d) 4 seconds e) none of these

10) If we want the settling time to be 4/21 seconds, the value of k_p should be

- a) 5 b) 10 c) 21 d) 25 e) none of these

11) If we assume the prefilter is 1 ($G_{pf}(s) = 1$), and we want the steady state error for a unit step to be 1/25, then we should choose the value of k_p to be

- a) 3 b) 4 c) 5 d) 6 e) none of these

12) Does a constant prefilter affect the settling time? a) yes b) no

Problems 13 -15 refer to a plant with transfer function $G_p(s) = \frac{5}{(s+1)(s+4)}$

13) The (2%) settling time for this plant is

- a) 1 seconds b) 2 seconds c) 3 seconds d) 4 seconds e) none of these

14) If the input to the plant is a unit step, the steady state error will be

- a) 0 b) 0.25 c) -0.25 d) 3/8 e) 1.0 f) none of these

15) The static gain of the plant is a) 1 b) 1.25 c) 5 d) none of these